







NOM:




NUMERACIÓ

Completa les sèries:




Completa les descomposicions:

C	D	U
<input type="checkbox"/>		<input type="checkbox"/>
<input type="checkbox"/>		<input type="checkbox"/>

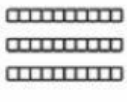
$$2 \text{ C} + 7 \text{ D} + 3 \text{ U}$$

$$200 + 70 + 3 = 273$$

C	D	U
<input type="checkbox"/>		<input type="checkbox"/>
<input type="checkbox"/>		<input type="checkbox"/>


$$\square \text{ C} + \square \text{ D} + \square \text{ U}$$

$$\square + \square + \square = \square$$

C	D	U
<input type="checkbox"/>		<input type="checkbox"/>
<input type="checkbox"/>		<input type="checkbox"/>

$$\square \text{ C} + \square \text{ D} + \square \text{ U}$$


$$\square + \square + \square = \square$$

C	D	U
<input type="checkbox"/>		<input type="checkbox"/>
<input type="checkbox"/>		<input type="checkbox"/>

$$\square \text{ C} + \square \text{ D} + \square \text{ U}$$

$$\square + \square + \square = \square$$

Completa aquestes descomposicions i escriu els nombres:

C	D	U
<input type="checkbox"/>		<input type="checkbox"/>
<input type="checkbox"/>		<input type="checkbox"/>
<input type="checkbox"/>		<input type="checkbox"/>

$$\square \text{ C} + \square \text{ D} + \square \text{ U}$$

$$\square + \square + \square = \square$$

348 ► *Tres-cents quaranta-vuit*

C	D	U
<input type="checkbox"/>		<input type="checkbox"/>
<input type="checkbox"/>		<input type="checkbox"/>
<input type="checkbox"/>		<input type="checkbox"/>

$$\square \text{ C} + \square \text{ U}$$

$$\square + \square = \square$$

► _____

Observa cada nombre representat i completa les descomposicions.



C	D	U

C + D + U
 + + =

C	D	U

C + D + U
 + + =

C	D	U

C + D + U
 + + =

C	D	U

C + U
 + =

Completa i escriu els nombres representats.

C	D	U



C + D + U
 + + =

► cinc-cents

C	D	U



C + D
 + =

► _____



LAURA

Els nombres del 600 al 999

Completa la taula:

Nombre	C	D	U	
639	6	3	9	▶ <i>six-cents</i>
770				▶ _____
808				▶ _____
932				▶ _____
				▶ set-cents noranta
				▶ sis-cents vuit
				▶ nou-cents deu
				▶ set-cents tretze