



## Time

### Bjc revision

1. Mark left home at 7: 24am and arrived at school at 8:50am.

(a) How long did Mark take to arrive at School ?

\_\_\_\_\_ hrs \_\_\_\_\_ mins



(b) Express your answer from part (a) in minutes. \_\_\_\_\_ mins

2.



Hobby Airlines leaves Nassau at 8:10 am and arrives in Inagua at 10:05 am. How long does the flight last? \_\_\_\_\_ hr : \_\_\_\_\_ mins

3.



(a) At what time did the job start? \_\_\_\_\_

(b) What time did the job end? \_\_\_\_\_

(c) How long did the job last? \_\_\_\_\_ hrs \_\_\_\_\_ mins

(d) Lunch on board the SS Rollaway is served at 1400 hours.

Express this time using the 12 hour clock. \_\_\_\_\_



4. (a) The clock shows 6:30pm. What time was it 4 hours and 30 minutes before 6:30pm?




\_\_\_\_\_ pm

(b)



This digital clock shows 6:45. What time will the clock show in 20 minutes ? \_\_\_\_\_

5.



Sam parked his car in a parking lot at 8:30am. He drove out 6 hours and 35 minutes later.

(a) At what time did Sam drive out of the parking lot? \_\_\_\_\_

The Parking rate is \$3.00 for the first hour and \$1.50 for each additional hour or part of an hour.

(b) Calculate Sam's parking bill.

\$ \_\_\_\_\_



