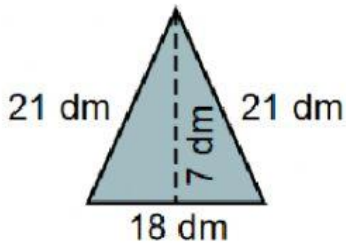


Calcula el área y el perímetro de las siguientes figuras.



$P =$             dm

$A =$             dm<sup>2</sup>



7 dm

$P =$             dm

$A =$             dm<sup>2</sup>



12 cm

$P =$             cm

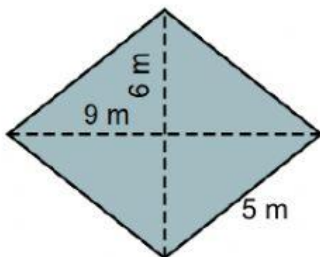
$A =$             cm<sup>2</sup>



15 cm

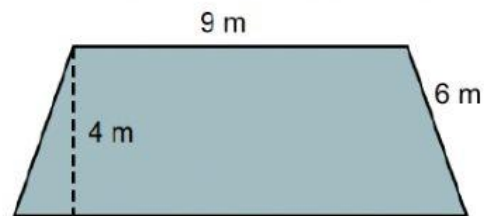
$P =$             cm

$A =$             cm<sup>2</sup>



$P =$             m

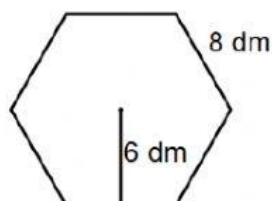
$A =$             m<sup>2</sup>



13 m

$P =$             m

$A =$             m<sup>2</sup>



8 dm

$P =$             dm

$A =$             dm<sup>2</sup>