


Realiza las siguientes restas.




$$5 - 4 = \square$$




$$3 - 1 = \square$$




$$4 - 2 = \square$$



$$6 - 5 = \square$$



$$2 - 1 = \square$$



$$5 - 1 = \square$$