

























Pictograph

Burger Queen

The local Burger Queen made a picture graph of the number of Bopper Burgers they sold during 4 days. Use the information to answer the questions.

Monday	    
Tuesday	      
Wednesday	     
Thursday	    

Each  stands for 5 Bopper Burgers

- 1) How many Boppers were sold on Thursday?
- 2) How many Boppers were sold on Monday and Tuesday?
- 3) On which day did Burger Queen sell 5 Boppers more than on Wednesday?
- 4) How many more Boppers were sold on Tuesday than on Thursday?
- 5) On which days were the same number of Boppers sold?
- 6) How many Bopper Burgers were sold on the 4 days altogether?