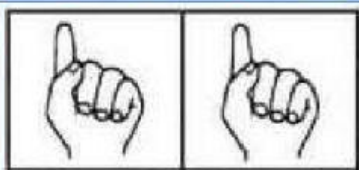
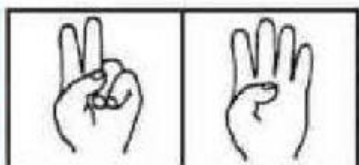


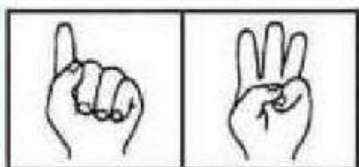
Cuenta los dedos y escribe el resultado de las sumas:



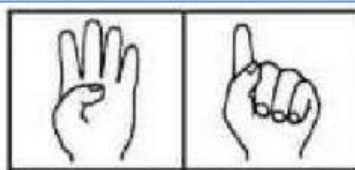
$$\square + \square = \square$$



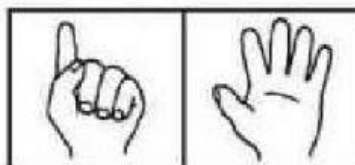
$$\square + \square = \square$$




$$\square + \square = \square$$



$$\square + \square = \square$$

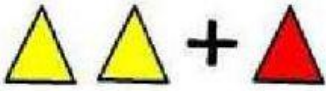


$$\square + \square = \square$$



$$\square + \square = \square$$

Realiza las sumas y arrastra el resultado hasta el recuadro:



2

+

1

=



1

+

3

=



2

+

3

=



4

+

2

=

4

3

6

5