






Name _____

M-5-21-D

Use the pictograph to answer the questions.

** Remember the word AND means to add categories together **

FRUIT	NUMBER OF CHILDREN WHO CHOSE IT
PEAR	
WATERMELON	
ORANGE	
APPLE	
BANANA	

How many children chose watermelon and banana?

How many children chose pear and apple?

How many children chose orange and pear?

How many children chose watermelon, orange, and apple?

Parents, siblings, helpers,

Please take a minute to fill out this "Exit Slip" to help us assess the level of understanding for this assignment.

- 1 - Student needed to have the answers fed to them.
- 2 - Student needed a lot of help to arrive at the correct answer.
- 3 - Student needed just a little help to arrive at the correct answer.
- 4 - Student completed the task independently. (Technical issues aside)

Enter a number here _____

Relationship to the student _____

Questions? Comments? (use this space)

Thank You - Remember: "Email my answers to my teacher"