


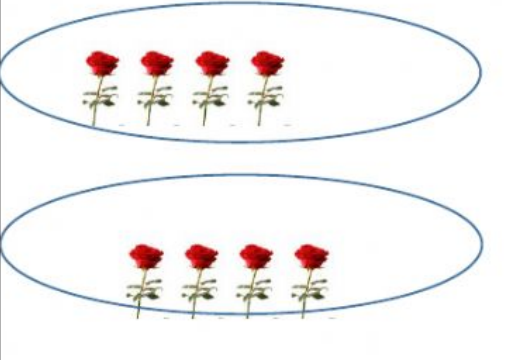


Name: _____

Date: _____

Division

Match the array on the left with the division sentence on the right. Fill in the blank with the missing quotient.

$$20 \div 4 = \underline{\quad}$$

Dividend: _____

Divisor: _____

Quotient: _____

$$12 \div 3 = \underline{\quad}$$

Dividend: _____

Divisor: _____

Quotient: _____

$$8 \div 2 = \underline{\quad}$$

Dividend: _____

Divisor: _____

Quotient: _____

$$15 \div 5 = \underline{\quad}$$

Dividend: _____

Divisor: _____

Quotient: _____