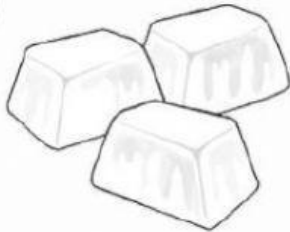


MATTER AND ENERGY.

1.- Write the three states of water.

a



b

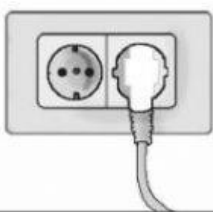


c



2.- Which type of energy do the pictures represent? Match.

a



kinetic energy

thermal energy


b



light energy

sound energy

c



electrical energy

chemical energy

d



e



f



3.- What is the name of the process?

- a** The process when water changes from a liquid to a solid. _____
- b** The process when water changes from a solid to a liquid. _____
- c** The process when water changes from a liquid to a gas. _____

4.- Are the sentences about energy true or false?

- a** We extract oil from the ground using drills.
- b** Wind is a non-renewable source of energy.
- c** Everything which moves has kinetic energy.
- d** Things which make noise have thermal energy.