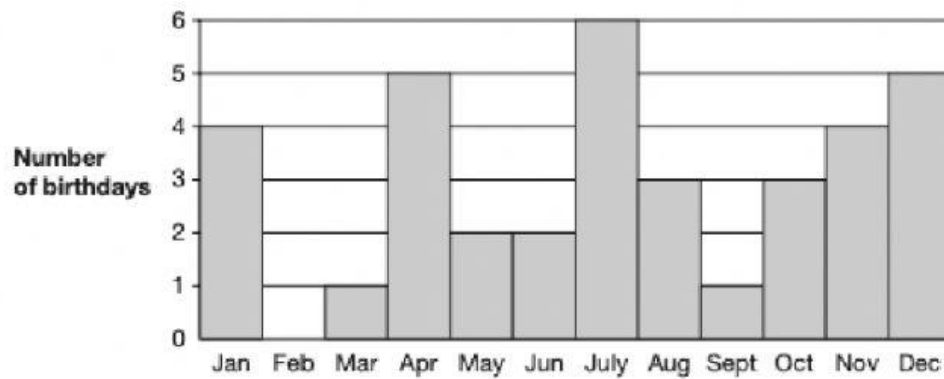


Revision 6

How many 10p coins can I get for £1.80?

- A 10 coins B 18 coins C 88 coins D 108 coins E 180 coins

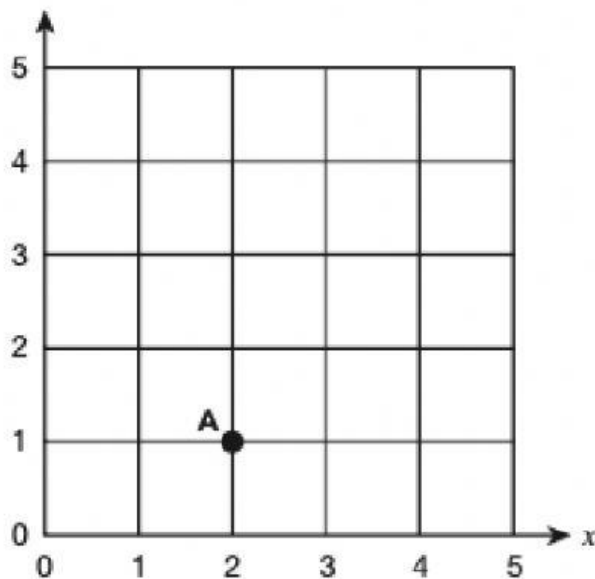


This bar chart shows during which months the children in a class have their birthdays.

During which month are there most birthdays?

Write this number in figures:

eight thousand and twenty-five



What are the coordinates of A?

Change the order of the figures 6085 to make the biggest number possible.

The time in New York is 5 hours behind the time in London.
In London it is 9 am.

What time is it in New York?

A 14:00

B 04:00

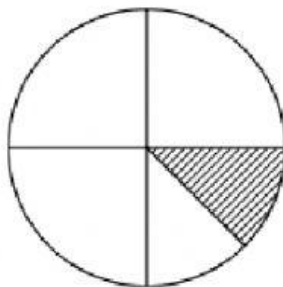
C 05:00

D 4 pm

E 5 pm

Share 240 into 4 equal parts.

How much is one part?



What fraction of this circle is shaded?

In the number 836, what does the 3 stand for?

What number would go in the box?

$$\frac{3}{4} = \frac{\boxed{}}{8}$$