



THE NEW INDIAN SCHOOL W.L.L 2022-23
KINGDOM OF BAHRAIN

MATHEMATICS


CLASS: I


WORKSHEET – ORDINAL NUMBERS


Name: - _____ Sec: - _____ Date: _____


At the annual sport event, a running race was organised in the forest. At the end of the race these were the final position of the animals. Write the ordinal number of each animal.




1. The  is in the _____ position.

2. The  is in the _____ position.

3. The  is in the _____ position.

4. The  is in the _____ position.

5. The  is in the _____ position.