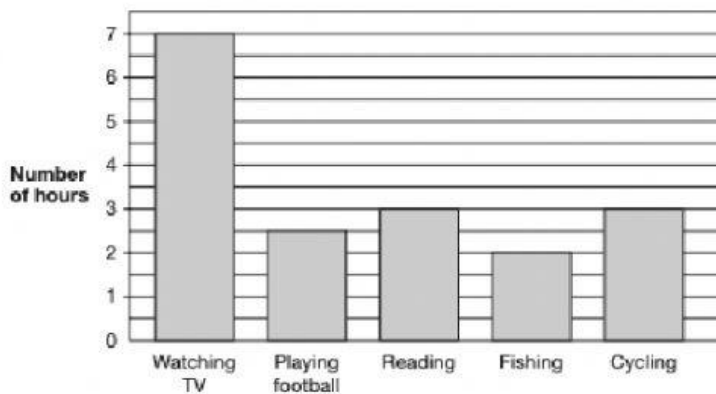


Revision 2

This chart shows how Kai spent his spare time last week.



How many hours did he spend out of doors?
(playing football, fishing and cycling)

Wendy saved £2.50 a week.

How many weeks did it take her to save £20?

An empty jar = 700 ml

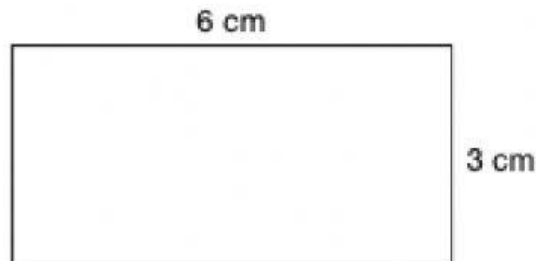



A jug holding 1 litre of water








The jug holds 1 litre of water.
The jar is **filled** from the jug.

How much water will be left in the jug?



How many small squares will fit into the large rectangle?

Which of these digital alarm clocks shows that it is quarter past seven in the evening?

- A  B 
- C  D 
- E 

A train left at 10.20.
It arrived at 11.15.

How long did the journey take, in minutes?

Matthew thinks of a number.
He multiplies his number by 2.
Then he subtracts 4.
The answer is 10.

What number did Matthew first think of?

- A 3 B 7 C 10 D 12 E 14

About how much does an ordinary mug hold?

- A 30 millilitres
B 300 millilitres
C 3 litres
D 30 litres
E 300 litres

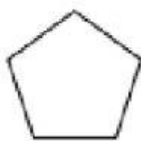
Join Heritage today! Take advantage of this great offer now.

Type of membership	Normal price	Offer price
Individual member	£47.90	£35.63
Joint membership (2 adults)	£79.50	£59.63
Family group (2 adults and children under 18)	£82.00	£61.50
Family one adult (1 adult and children under 18)	£82.00	£46.50
Young person – aged 13–25	£24.50	£16.13


Mrs Ward wants to join Heritage with her three children, aged 10, 12 and 15.

How much must she pay?


- A** £82.00 **B** £62.63 **C** £62.00 **D** £61.50 **E** £46.50




A



B



C



D



E

Which of these is NOT a quadrilateral?