

Revision 5

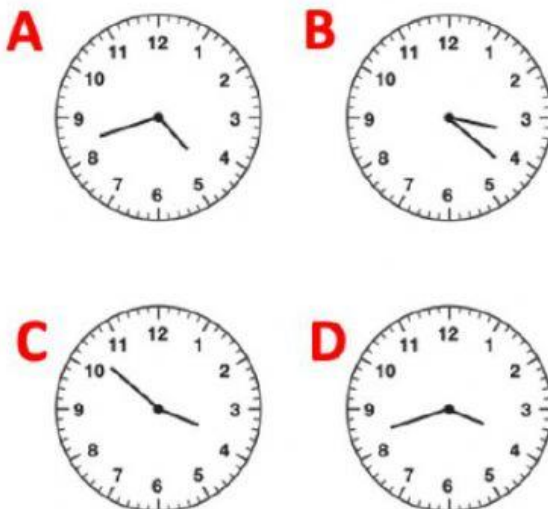
1. What do you get if you subtract 47 from 91?

2. Read the question below and answer

There are 16 students from Mr. Block's class at the library. The other four students in the class are practicing math facts in the classroom. Which number sentence shows the total number of students in Mr. Block's class?

- A. $16 + 4$
- B. $16 - 4$
- C. 16×4
- D. $16 \div 4$

3. Which clock shows the time 3.42?

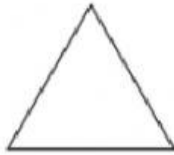


4. Which unit of measurement would you use to measure a spoon?




5. Which of these triangles has an OBTUSE angle?

A.




B.



C.

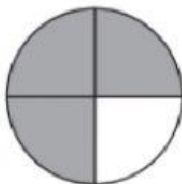


D.

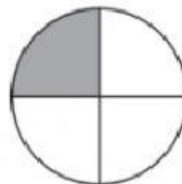


6. Which of these shows a half?

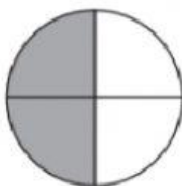
A.



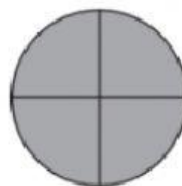
B.



C.

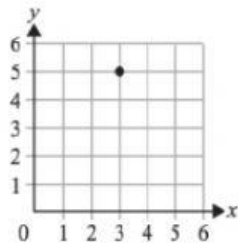


D.

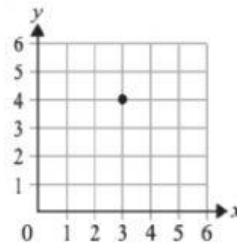


7. Which of these shows the coordinates (3,5)?

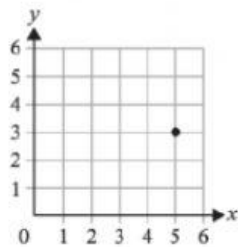
A.



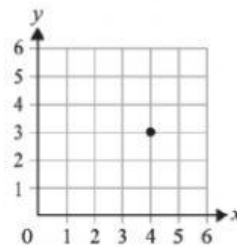
B.



C.



D.

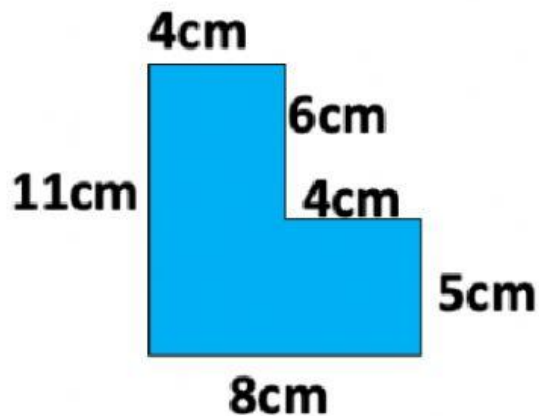


8. Read the question below and answer.

Sara has \$56.00. She earns \$19.00 more. How much money does Sara have in all?

- A. \$37.00
- B. \$43.00
- C. \$65.00
- D. \$75.00

9. What is the perimeter of this shape?



10. What is four multiplied by 8?