



## Grade 1

### Revision Worksheet

1 Write the number names for the given numbers.


(a) 3

(b) 7


(c) 5

(d) 8


2 Write bigger or smaller.

(a)  Mamma kangaroo is \_\_\_\_\_ than baby kangaroo.




(b)  This tree is \_\_\_\_\_ than that tree.



(c)  Papa rhino is \_\_\_\_\_ than baby rhino.



(d)  This pineapple is \_\_\_\_\_ than that pineapple.



7 Write the number that comes before, after or in between.

(a)  6

(b) 3

(c) 7

(d) 4  6

(e) 2  4

(f)  8

(g) 1

(h)  9

(i) 5  7

4 Put the correct sign  $>$ ,  $<$  or  $=$ .

(a) 1  5

(b) 4  3

(c) 6  9

(d) 2  2

5 Arrange the numbers in increasing order.

(a) 7, 3, 1, 4

<input type="text"/>	<input type="text"/>	<input type="text"/>	<input type="text"/>
----------------------	----------------------	----------------------	----------------------

(b) 2, 4, 8, 6

<input type="text"/>	<input type="text"/>	<input type="text"/>	<input type="text"/>
----------------------	----------------------	----------------------	----------------------

(c) 5, 3, 9, 2

<input type="text"/>	<input type="text"/>	<input type="text"/>	<input type="text"/>
----------------------	----------------------	----------------------	----------------------

6 Arrange the numbers in decreasing order.

(a) 7, 3, 1, 4

<input type="text"/>	<input type="text"/>	<input type="text"/>	<input type="text"/>
----------------------	----------------------	----------------------	----------------------

(b) 2, 4, 8, 6

<input type="text"/>	<input type="text"/>	<input type="text"/>	<input type="text"/>
----------------------	----------------------	----------------------	----------------------

(c) 5, 3, 9, 2

<input type="text"/>	<input type="text"/>	<input type="text"/>	<input type="text"/>
----------------------	----------------------	----------------------	----------------------