

REPÀS ANGLES




1. Selecciona el nom d'aquests angles i la seua característica.



Angle: _____
Mesura: _____




Angle: _____
Mesura: _____



Angle: _____
Mesura: _____

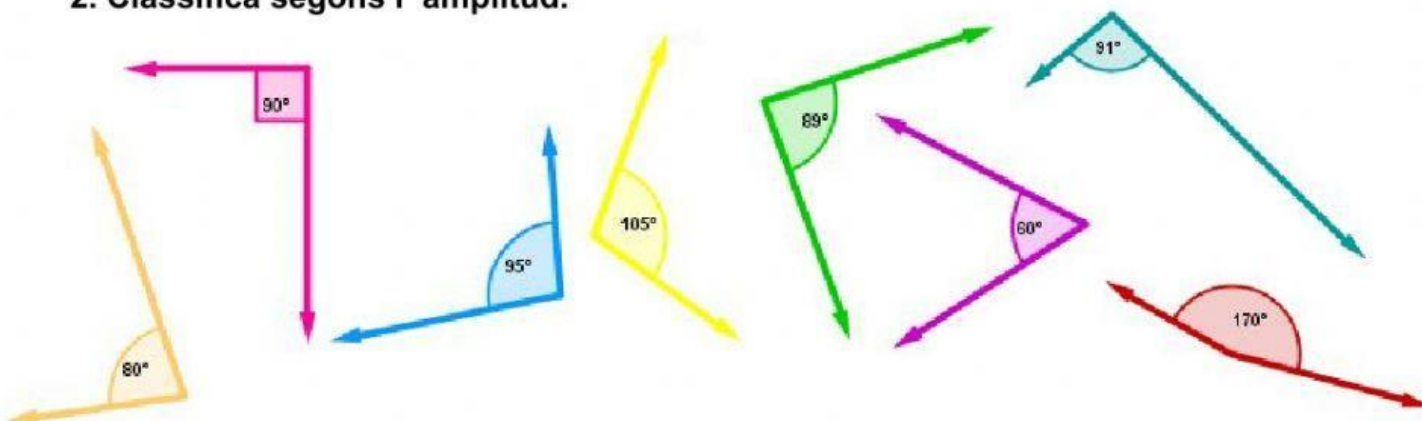


Angle: _____
Mesura: _____




Angle: _____
Mesura: _____

2. Classifica segons l' amplitud.



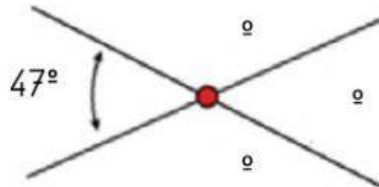
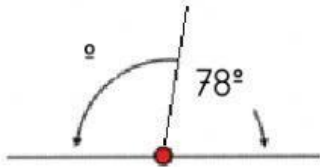
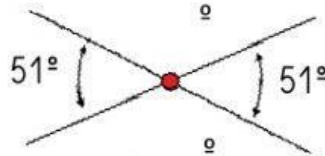
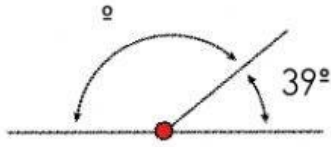
RECTE	ANGLE AGUT		ANGLE OBTÚS	

REPÀS ANGLÉS



3. Calcula segons les posicions dels angles.

(Fes els càlculs a llibreta)

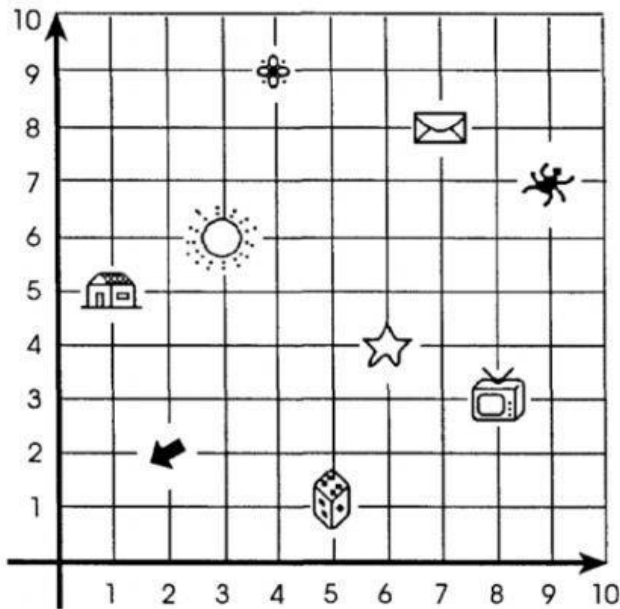


RECORDA:

Angle **pla** mesura en total **180°**

Angle **complet** mesura **360°**

4. Escriu les coordenades mirant el plànol.



RECORDA:

1er Eix horitzontal →

2n Eix vertical ↑

