

Choose the best answer.

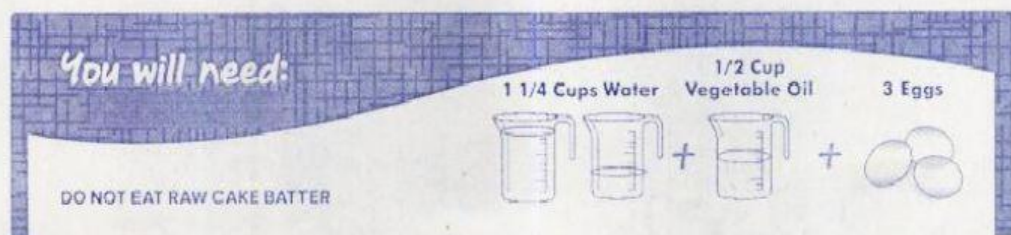
Test: P.6. Set.8 Y.64

1. Tara is driving and she sees this sign. What does it mean?



1. You can park here.
2. You can take photos.
3. Here is the post office.
4. Here is the playground.

2. Look at the label.



Mona wants to bake a cake from the cake mix. What does she need?

1. Two cups of water, one cup of oil, and three egg whites.
2. Two cups of water, a quarter of oil, and three egg whites.
3. One cup and a half of water, one cup of oil, and three eggs.
4. One cup and a quarter of water, half cup of oil, and three eggs.

3. Look at the picture.



Which of the following is correct?

1. She is selling on the road.
2. They are digging the road.
3. They are cleaning the road.
4. She is driving along the road.


4. Tom accidentally splashed Bobby's eyes with water, so Bobby cried, "\_\_\_\_\_"



- |              |               |
|--------------|---------------|
| 1. Shut up!  | 2. Stop that! |
| 3. Get this! | 4. Come on!   |



5. Eggs and their shells mean new life. People paint these eggs beautifully. What day do people celebrate?



- |                 |                   |
|-----------------|-------------------|
| 1. Easter       | 2. Christmas      |
| 3. Mother's Day | 4. Children's Day |

6. Steve and his brother are sunbathing at the beach. Which season is it most likely to be?

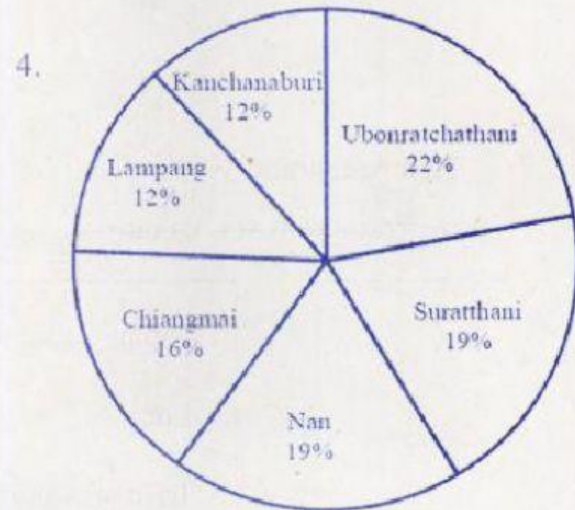
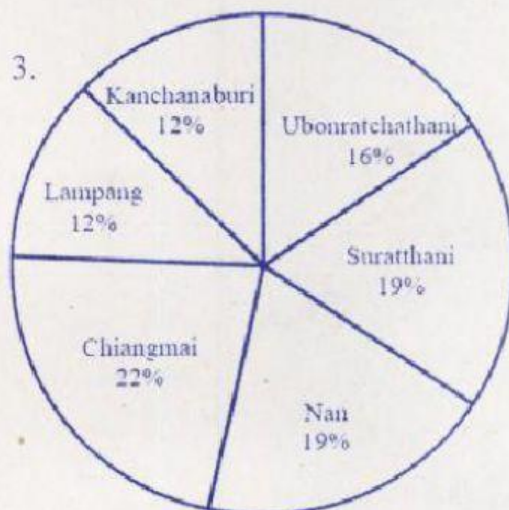
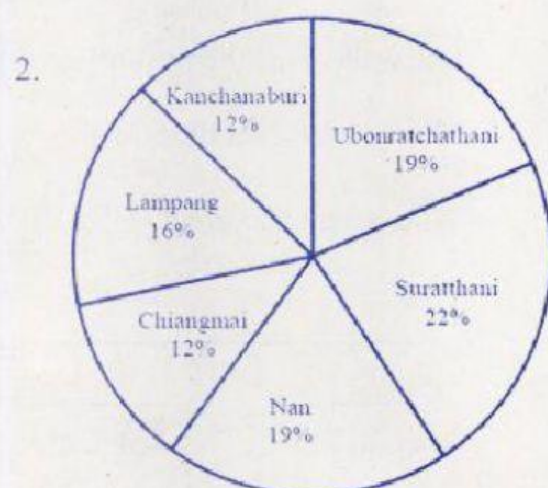
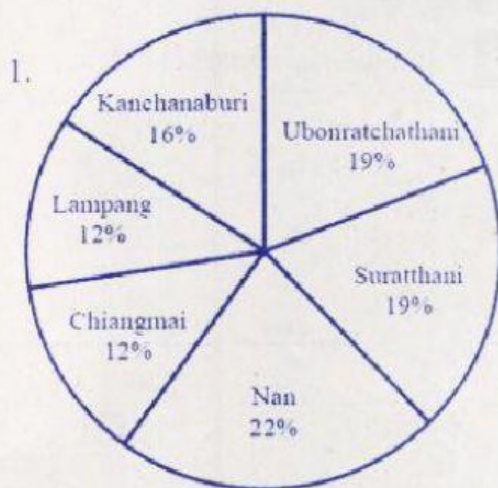


- |           |           |
|-----------|-----------|
| 1. Spring | 2. Winter |
| 3. Autumn | 4. Summer |

7. At a restaurant, Noah wants \_\_\_\_\_, but Jack, his friend, tells him that the restaurant serves only Thai and Asian food.

1. Japanese ramen
2. Laotian papaya salad
3. Irish stewed pork ribs
4. Thai spicy prawn soup

8. If Ubonratchathani has the highest rainfall, which pie chart correctly shows the percentage of rainfall in the provinces?





9. Read the sentences.

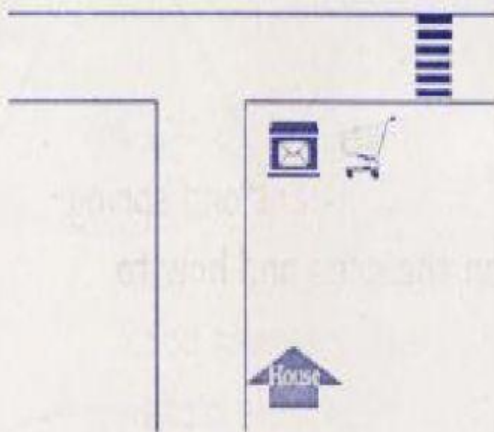
Jane goes out of the house. She walks to the corner, and then turns right.

She walks past the post office  and the supermarket. 

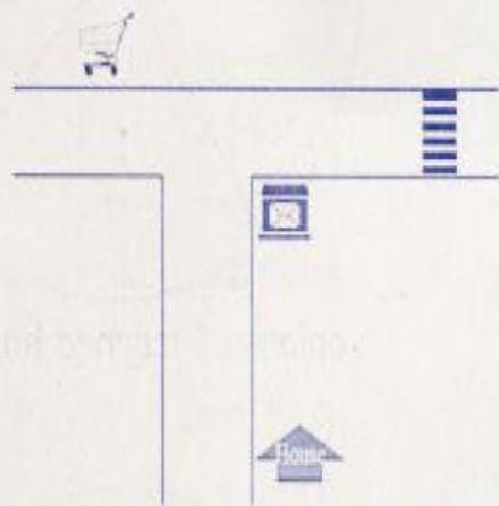
Then she crosses the street.

Which map is correct?

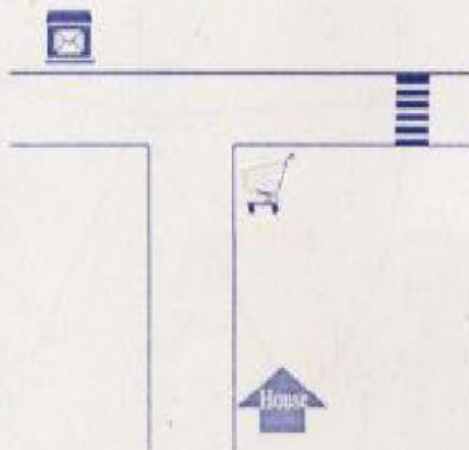
1.



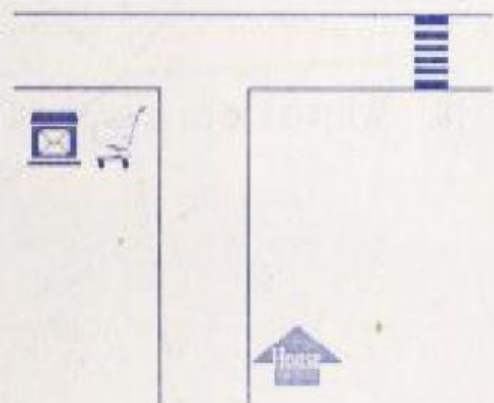
2.



3.



4.



Items 10-13 Read Pong's diary and answer questions.



October 13, 2021

COVID-19 is still around. No school now! Today we made a garden for growing collard greens and spring onions. I learned how to plan the area and how to plant vegetables on the land, not in a flower pot. We used bamboo stalks to make vegetable plots. Dad and I had fun making them. Dad asked me to measure two vegetable plots. I'm so proud of myself. Soon we'll have organic vegetables at home!

10. What is the passage about?

1. Onions
2. School
3. Having collard greens
4. Growing vegetables

11. Which of the following did Pong do?

1. Plant flowers.
2. Measure the plots.
3. Grow bamboo.
4. Eat organic vegetables.

12. What did Pong and his father plant?

1. Bamboo and flowers
2. Flowers and collard greens
3. Spring onions and bamboo
4. Collard greens and spring onions

13. Why is Pong proud of himself?

1. He can cut flowers.
2. He can plant bamboo.
3. He can grow vegetables.
4. He can sell organic food.



14. Which sentence does NOT have correct punctuation?

1. Henry is very tall.
2. Has Henry just left.
3. How much did Henry pay?
4. How long will Henry stay?

15. Which sentence is correct?

1. People usually have breakfast in the morning.
2. In the morning have breakfast usually people.
3. Breakfast in the morning have people usually.
4. Usually have people in the morning breakfast.

16. Which question has a different intonation?

1. Where are you going?
2. Why are you going to school?
3. Are you going to school now?
4. When are you going to school?