

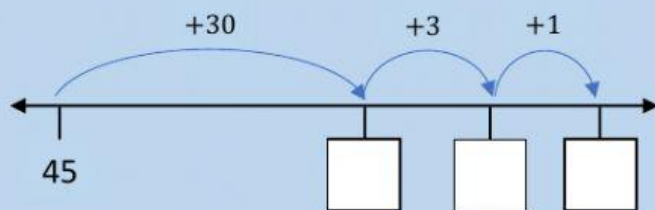
Homework Grade 4

Addition and Subtraction

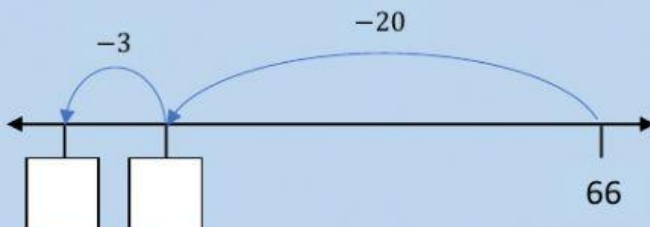
A. Calculating on the number line

Complete these calculation

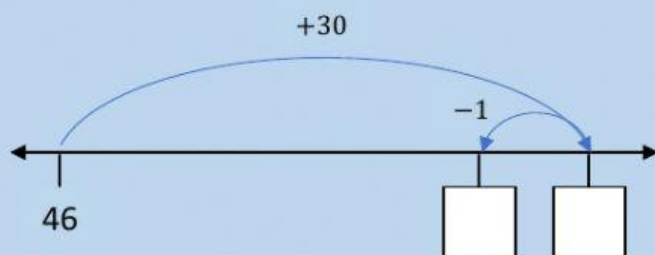
$$45 + 34 = \square$$



$$66 - 23 = \square$$



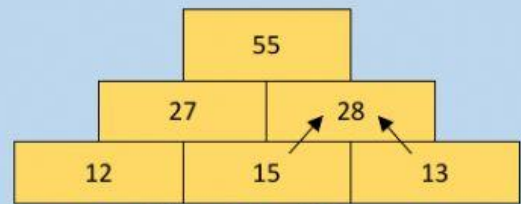
$$46 + 29 = \square$$



Number walls

The numbers in each brick is the sum of the numbers in the two bricks below it.

Hint: Use addition and subtraction to complete the



Sample: $15 + 13 = 28$

