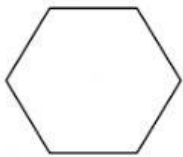


Name: \_\_\_\_\_

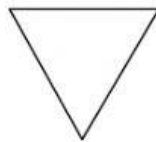
## 2D Shapes

**Use the words in the box to complete the following.**

circle	triangle	rectangle	square	oval
rhombus	pentagon	hexagon	octagon	



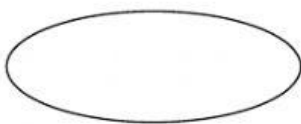
\_\_\_\_\_



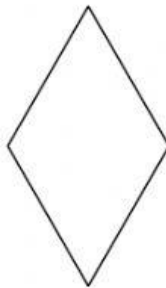
\_\_\_\_\_




\_\_\_\_\_



\_\_\_\_\_



\_\_\_\_\_



\_\_\_\_\_

## Who am I?

1. I have five sides and five corners.

\_\_\_\_\_

2. I have three sides and three corners.

\_\_\_\_\_

3. I have eight sides and eight corners.

\_\_\_\_\_

4. We do not have any corners. \_\_\_\_\_  
and \_\_\_\_\_

5. I have four sides. Two of them are long and  
two are short. \_\_\_\_\_