


Name : _____ Date : _____

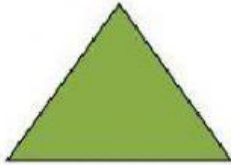


sides


vertices

Sides and Vertices

Write how many sides and vertices each shape has.



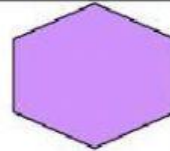
_____ sides _____ vertices




_____ sides _____ vertices



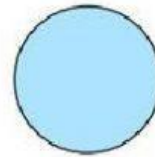
_____ sides _____ vertices




_____ sides _____ vertices




_____ sides _____ vertices



_____ sides _____ vertices



_____ sides _____ vertices



_____ sides _____ vertices