



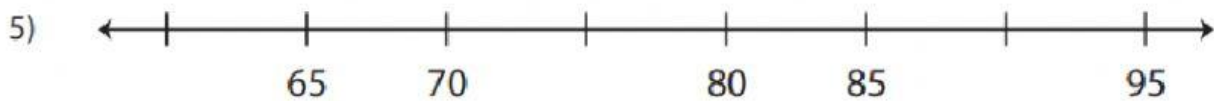
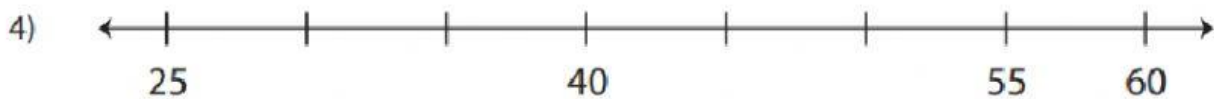
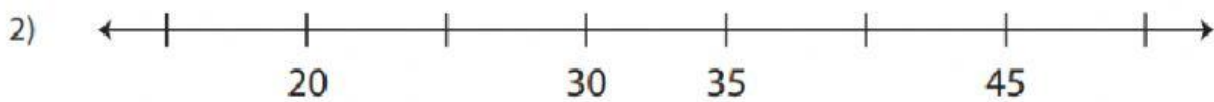
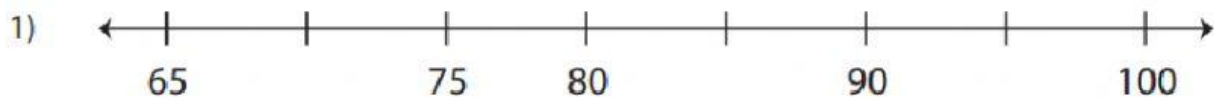
Name -			
Phase 1- Foundation Numeracy			
Class Worksheet -28			
Stage-	Progressing	Grade-	2
Conceptual Area -	Number System	Topic-	Skip Counting by 5's

I Count by 5s, and fill in the missing numbers.

5			20	
		40		
	60			75
80		90		
		115		125
	135			
155			170	
		190		
	210		220	
				250

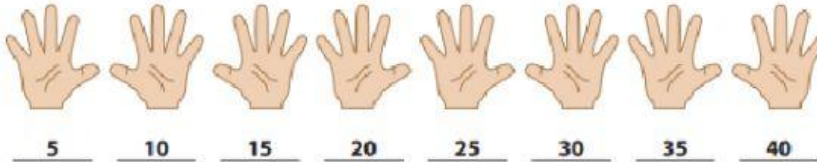


II. Skip count by 5's and complete each number line




III. Skip counting by 5s

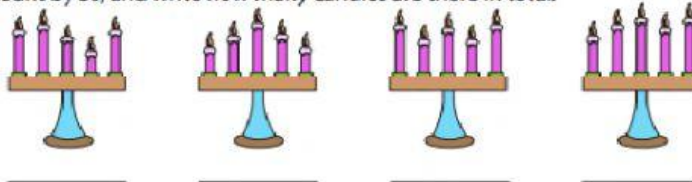
- 1) Count by 5s, and write how many fingers are there altogether.



- 2) Count by 5s, and write how many eggs are there in all.



- 3) Count by 5s, and write how many candles are there in total.



- 4) Count by 5s, and write how many balls are there in all.



- 5) Count by 5s, and write how many flowers are there in total.



Answers:

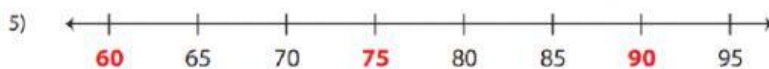
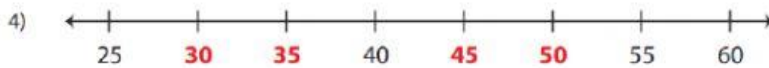

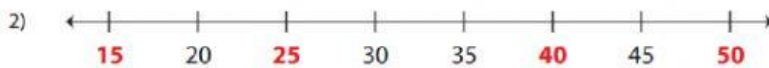
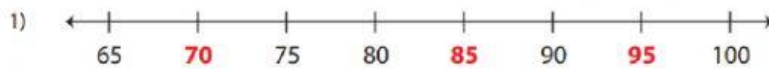
I Skip Counting by 5s

Count by 5s, and fill in the missing numbers.

5	10	15	20	25
30	35	40	45	50
55	60	65	70	75
80	85	90	95	100
105	110	115	120	125
130	135	140	145	150
155	160	165	170	175
180	185	190	195	200
205	210	215	220	225
230	235	240	245	250

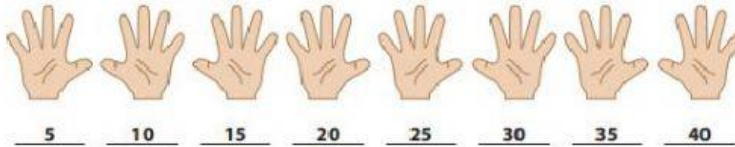


II. Skip count by 5's and complete each number line




III. Skip counting by 5s

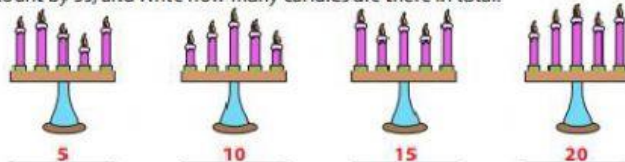
- 1) Count by 5s, and write how many fingers are there altogether.



- 2) Count by 5s, and write how many eggs are there in all.



- 3) Count by 5s, and write how many candles are there in total.



- 4) Count by 5s, and write how many balls are there in all.



- 5) Count by 5s, and write how many flowers are there in total.

