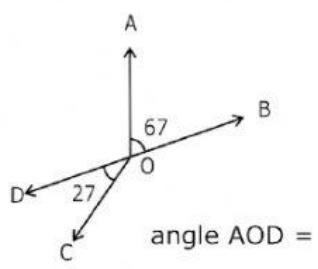
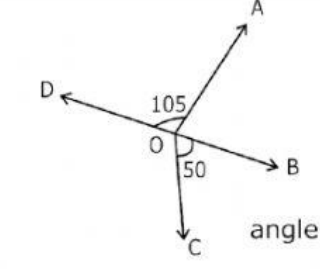
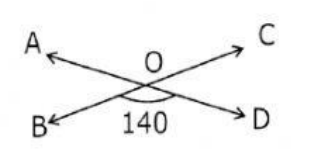
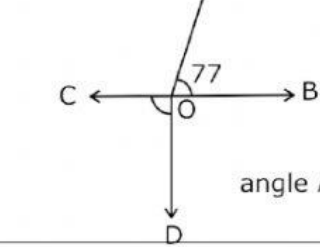
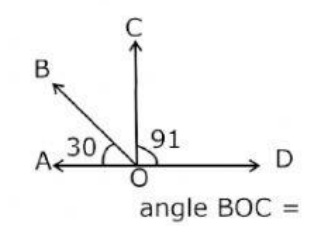
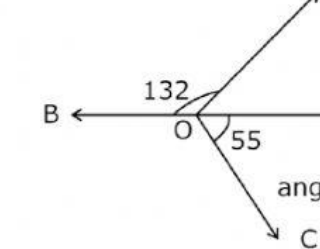
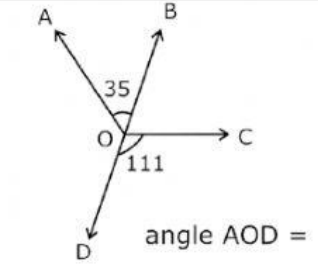
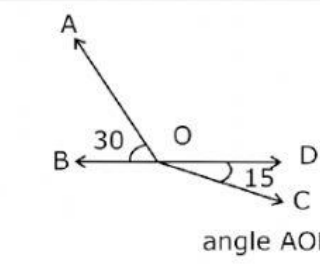


Calculate Angles – Show the Skill

Name _____

Date _____

Calculate the angles in degrees. Do not try to measure, because the pictures are not exact.

1	 <p style="text-align: right;">angle AOD =</p>	2	 <p style="text-align: right;">angle AOB =</p>
3	 <p style="text-align: right;">angle AOC =</p>	4	 <p style="text-align: right;">angle AOC =</p>
5	 <p style="text-align: right;">angle BOC =</p>	6	 <p style="text-align: right;">angle AOD =</p>
7	 <p style="text-align: right;">angle AOD =</p>	8	 <p style="text-align: right;">angle AOD =</p>