



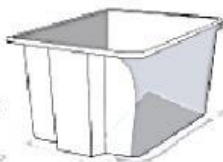
Cambridge Primary Programme

Name: \_\_\_\_\_

Date: \_\_\_\_\_

Class: \_\_\_\_\_

1. Draw lines to match the pictures with the materials.



glass

rock

wood

paper

plastic

fabric

metal



2. What materials are these things made of? Choose and write.

plastic


rubber

metal

paper

fabric

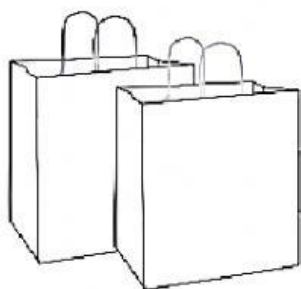
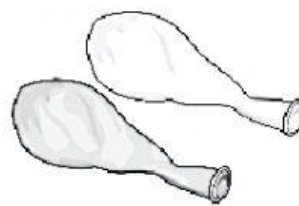
rock



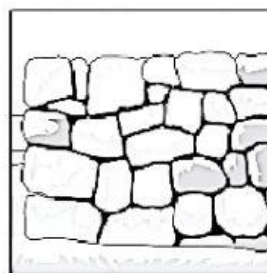
metal



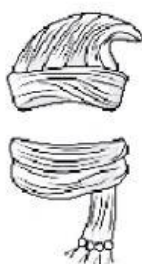
a \_\_\_\_\_



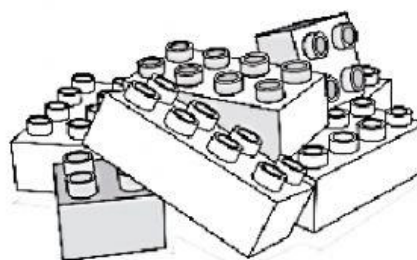
b \_\_\_\_\_



c \_\_\_\_\_



d \_\_\_\_\_



e \_\_\_\_\_

3. Which do these things go in? Draw lines.



4. Read, circle and write.

a



rock

paper

glass

soft

shiny

The mirror is made from \_\_\_\_\_ because this material is \_\_\_\_\_.

b



paper

fabric

metal

soft

shiny

The T-shirt is made from \_\_\_\_\_ because this material is \_\_\_\_\_.

c



paper

rubber

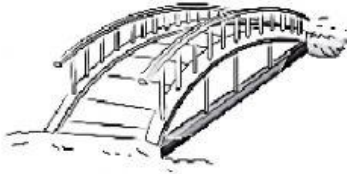
glass

rough

flexible

The balloon is made from \_\_\_\_\_ because this material is \_\_\_\_\_.

d



metal

paper

rubber

strong

soft

The bridge is made from \_\_\_\_\_ because this material is \_\_\_\_\_.

e



paper

rock

glass

soft

flexible

strong

The castle is made from \_\_\_\_\_ because this material is \_\_\_\_\_.