




VALENTINES PUZZLES



Instructions: Determine what each of the Christmas images represent in the following maths problems:



+



+



=

three



+



-



=

three



-



+



=

two



+



+



=



+



+



=