


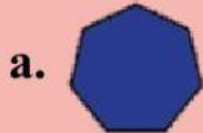
Activity

Level 1: Multiple choice:


1- Which of these pictures represents a polygon shape:



2- Which of these pictures represents a non- polygon shape:



3- Which of the following options represents a pentagon?



Level 2: Match each polygon with its correct description:

1- I have 3 sides and 3 angles.	
2- I am an incomplete shape, I have 4 sides and 3 angles.	
3- I have 8 sides and 8 angles.	

Level 3: look around the classroom and write at least three shapes that are polygon and non-polygon, and describe it in terms of the sides and angles.

Polygon shapes	Non-polygon shapes