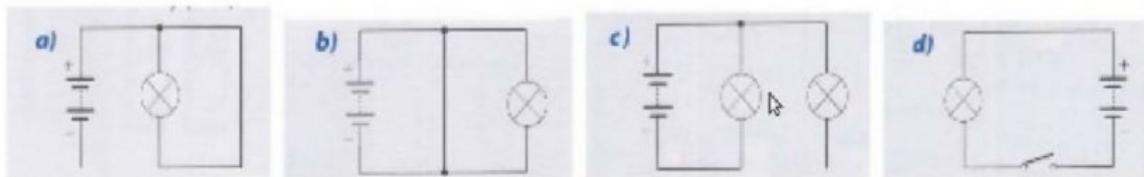


1.-Indicate whether the following statements are true or false:

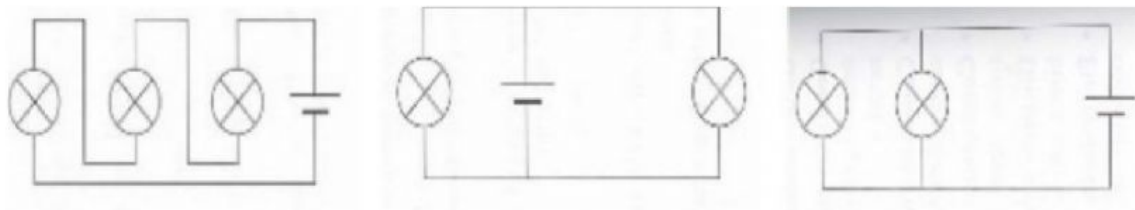
- a) The Resistance is measured in Volts
- b) The Voltage is measured in Ohms
- c) The Current is measured in Amps
- d) OHM's Law is the relation between: Voltage, Resistance and my dog.

2.- Analyze each circuit and answer if it is going to work or not:

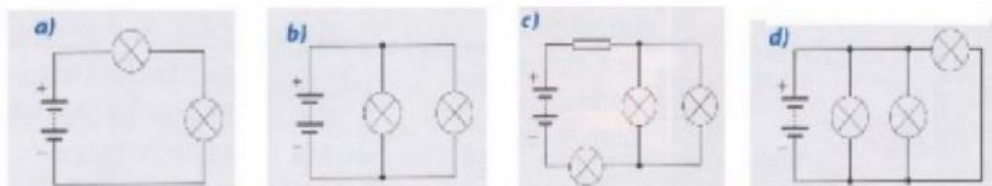


 **LIVEWORKSHEETS**

3.-Which of these circuits are in series and which are in parallel:



4.-Write in each circuit if it es series, parallel or a combination between both:



5.-How is better to connect light bulbs in a circuit at home, in series or in parallel? Why?:

 **LIVEWORKSHEETS**