

7. Compare the numbers.
Fill in the blanks.

(a)   

12 is the smallest number.

18 is the greatest number.

(b)    

10 is the smallest number.

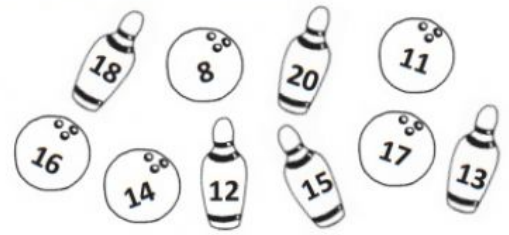
16 is the greatest number.


(c)     

9 is the smallest number.

19 is the greatest number.


8. These are Azwan's bowling pins and balls.
Help him arrange them neatly.



- (a) **Move** the numbers on the  in order.
Begin with the smallest number.



smallest

- (b) **Move** the numbers on the  in order.
Begin with the greatest number.



greatest