

**WEATHER** (Celsius temperatures)

**Instructions:**

Read the 2 weather reports and decide if each statement is true or false.



**Weather Report #1**

	Fri 04/08	Sat 04/09	Sun 04/10	Mon 04/11	Tue 04/12	Wed 04/13	Thu 04/14
	Chance of a shower	Mainly sunny	A mix of sun and clouds	Chance of a shower	Chance of a shower	Chance of a shower	Mainly sunny
	10°	9°	7°	9°	8°	9°	9°
Night	4°	3°	3°	4°	4°	4°	5°
POP	40 %	30 %	30 %	40 %	40 %	40 %	20 %

1. It's raining on Saturday with a high of 9 degrees and a low of 5 degrees.

a)

TRUE

b)

FALSE

**2. The lowest temperature this week is 3 degrees.**

a)

TRUE

b)

FALSE

**3. I need an umbrella on April 14<sup>th</sup>.**

a)

TRUE

b)

FALSE

**4. It will be a low of 4 degrees on April 11<sup>th</sup>.**

a)

TRUE

b)

FALSE

**5. There is a 40% chance of rain on April 8<sup>th</sup>.**

a)

TRUE

b)

FALSE

# Whitehorse, YT Weather








Updated on Thu, Apr 7, 10:55 a.m.

0°C  
FEELS LIKE -6



Partly cloudy

## Weather Report #2

	Fri 04/08	Sat 04/09	Sun 04/10	Mon 04/11	Tue 04/12	Wed 04/13	Thu 04/14
	Mainly sunny	Scattered flurries	A mix of sun and clouds	Cloudy with sunny breaks	A mix of sun and clouds	A mix of sun and clouds	A mix of sun and clouds
							
	3°	0°	-3°	-5°	-4°	-4°	-3°
Night	-5°	-9°	-10°	-13°	-12°	-12°	-11°
POP	20 %	60 %	30 %	40 %	20 %	20 %	30 %



Stefanie Henders, Richmond, BC

**6. It will be a low of 13 degrees on Monday.**

a)

**TRUE**

b)

**FALSE**

**7. The warmest day will be on Friday.**

a)

**TRUE**

b)

**FALSE**

**8. There is a 40% chance of rain or snow on Tuesday.**

a)

**TRUE**

b)

**FALSE**

**9. It will be a low of -12 degrees on April 13<sup>th</sup>.**

a)

**TRUE**

b)

**FALSE**

**10. It's going to snow on Saturday.**

a)

**TRUE**

b)

**FALSE**