

Name: \_\_\_\_\_

Date: \_\_\_\_\_

### TEKS 3.7D Measuring Capacity and Weight Practice #1

1 Emily drank a bottle of water after track practice. Which unit of measurement can be used to measure the volume of the water bottle?

A Pounds

B Feet

C Fluid Ounces

D Inches

2 Marcus has a collection of a box of seashells. Which unit of measurement can be used to determine the weight of the box of seashells?

A Gallons


B Pounds

C Yards

D Fluid Ounces

3 Which object would likely be weighed in tons?

A **Elephant**



C **Paperclip**




B **Cupcake**



D

**Book**



4 Which of the following scenarios would NOT be an example of measuring for capacity?

- A Filling a fish tank with water
- B Filling a glass with orange juice
- C Filling a mug with hot cocoa
- D Placing a bag of seashells on a scale

---

5 Raul has a swimming pool in his backyard. Which unit of measurement should be used to determine the capacity of the swimming pool?

- A Yards
- B Gallons
- C Centimeters
- D Tons

---

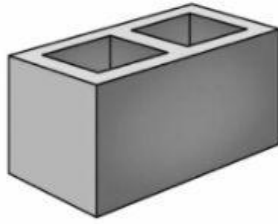
6 A quarter is shown.



Thomas wants to find the weight of the quarter. Which unit of measurement should Thomas use?

- A Pounds
- B Tons
- C Fluid Ounces
- D Grams

7 A concrete brick is shown.



Which unit of measurement can be used to determine the weight of the concrete brick?

A Fluid Ounces

B Inches

C Pounds

D Pints

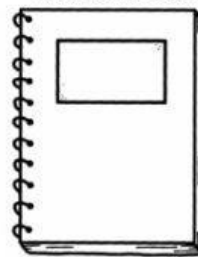
---

8 Gavin is measuring the capacity of an object using fluid ounces. Which could be the object that is being measured for capacity?

A **Soda Can**



C **Notebook**



B **Chair**



D **Dollar Bill**

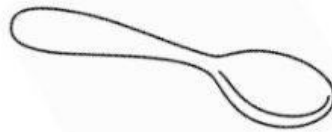


9 Daniel wants to find the weight of a paper clip. Which unit of measurement can be used to find the weight of the paper clip?

- A Tons
- B Ounces
- C Quart
- D Meters

---

10 Lucy wants to find the capacity of a spoon.



Which unit of measurement can be used to find the capacity of the spoon?

- |               |           |
|---------------|-----------|
| A Milliliters | C Gallons |
| B Liters      | D Quarts  |

---

11 Brenda filled a glass with milk. Which unit of measurement can be used to find the volume of the glass?

- A Pounds
- B Fluid Ounces
- C Feet
- D Tons

---

12 Which object would likely be weighed in pounds?

- A Pencil
- B Car
- C Bag of Apples
- D Coin