





Name _____

GREATER OR LESS THAN?

Mass Edition

Directions: Look at the following items and estimate whether the mass of each object would be less or more than 1 kg.

Hint: 1 kg is = 1000 g
a paper clip is about 1 gram
a baseball bat is about 1 kilogram

Object	less or more than 1 kg (circle one)
	less or more
	less or more
	less or more
	less or more

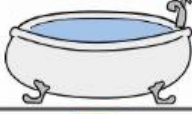



Name _____

GREATER OR LESS THAN?

Capacity Edition

Directions: Look at the following items and estimate whether the capacity of each object would be less or more than 1 L.

Hint: 1000 ml is = 1 liter
1 drop of water is a ml
1 small bottle of water is a L

Object	less or more than 1 L (circle one)
	less or more
	less or more
	less or more
	less or more