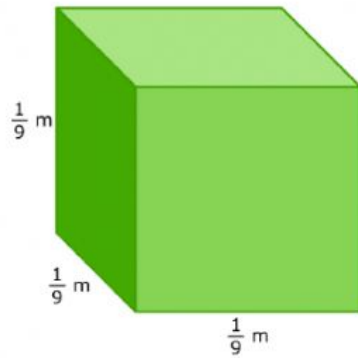


4/11 Monday Part I Live Worksheet

Name: _____

Find the volume of the rectangular prism.

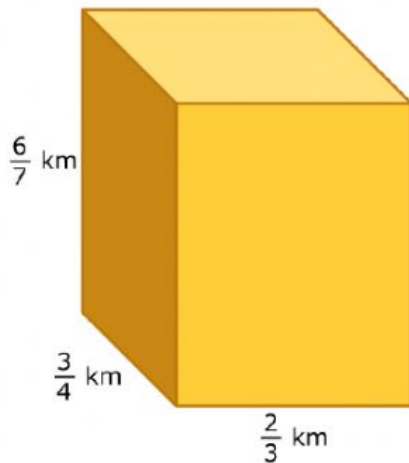
1)



Write your answer as a whole number, a proper fraction, or a mixed number.

cubic meters

2)

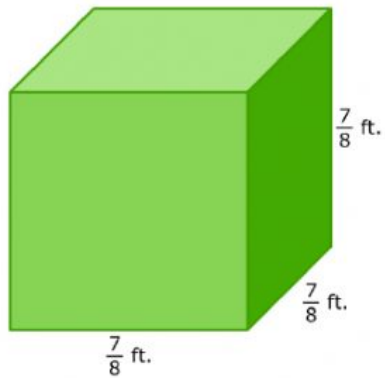


Write your answer as a whole number, a proper fraction, or a mixed number.

cubic kilometers

3)

Find the volume of the cube.



Write your answer as a whole number, a proper fraction, or a mixed number.

cubic feet

4)



Write your answer as a whole number, a proper fraction, or a mixed number.

cubic centimeters

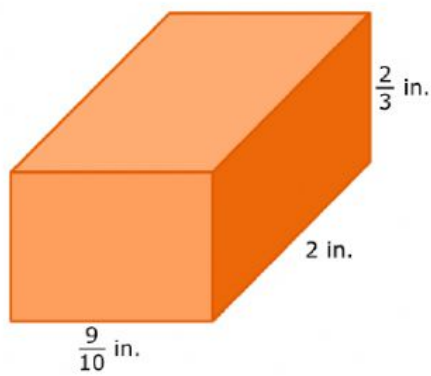
5)



Write your answer as a whole number, a proper fraction, or a mixed number.

cubic feet

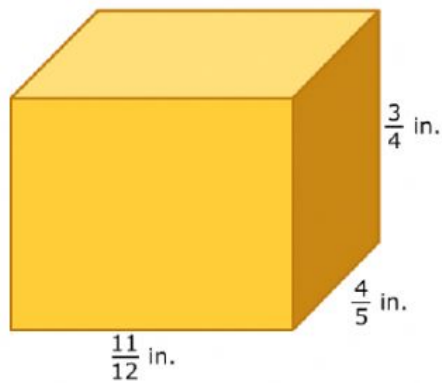
6)



Write your answer as a whole number, a proper fraction, or a mixed number.

cubic inches

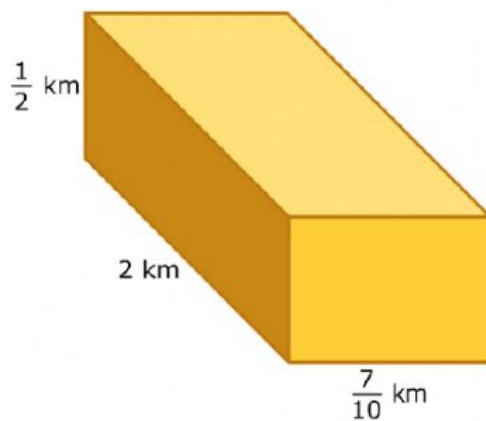
7)



Write your answer as a whole number, a proper fraction, or a mixed number.

cubic inches

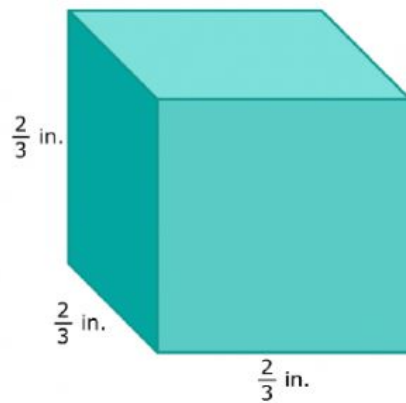
8)



Write your answer as a whole number, a proper fraction, or a mixed number.

cubic kilometers

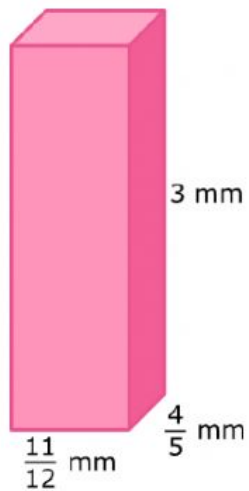
9)



Write your answer as a whole number, a proper fraction, or a mixed number.

cubic inches

10)



Write your answer as a whole number, a proper fraction, or a mixed number.

cubic millimeters