

WEATHER (Celsius temperatures)

Instructions:

Read the 2 weather reports and decide if each statement is true or false.



Weather Report #1

	Fri 04/08	Sat 04/09	Sun 04/10	Mon 04/11	Tue 04/12	Wed 04/13	Thu 04/14
	Chance of a shower	Mainly sunny	A mix of sun and clouds	Chance of a shower	Chance of a shower	Chance of a shower	Mainly sunny
	10°	9°	7°	9°	8°	9°	9°
Night	4°	3°	3°	4°	4°	4°	5°
POP	40 %	30 %	30 %	40 %	40 %	40 %	20 %

1. It's raining on Saturday with a high of 9 degrees and a low of 5 degrees.

a)

TRUE

b)

FALSE

2. The lowest temperature this week is 3 degrees.

a)

TRUE

b)

FALSE

3. I need an umbrella on April 14th.

a)

TRUE

b)

FALSE

4. It will be a low of 4 degrees on April 11th.

a)

TRUE

b)

FALSE

5. There is a 40% chance of rain on April 8th.

a)

TRUE

b)

FALSE

Whitehorse, YT Weather








Updated on Thu, Apr 7, 10:55 a.m.

0°C
FEELS LIKE **-6**



Partly cloudy

Weather Report #2

Fri 04/08	Sat 04/09	Sun 04/10	Mon 04/11	Tue 04/12	Wed 04/13	Thu 04/14
Mainly sunny	Scattered flurries	A mix of sun and clouds	Cloudy with sunny breaks	A mix of sun and clouds	A mix of sun and clouds	A mix of sun and clouds
						
3°	0°	-3°	-5°	-4°	-4°	-3°
-5°	-9°	-10°	-13°	-12°	-12°	-11°
20 %	60 %	30 %	40 %	20 %	20 %	30 %



6. It will be a low of 13 degrees on Monday.

b)

TRUE

b)

FALSE

7. The warmest day will be on Friday.

b)

TRUE

b)

FALSE

8. There is a 40% chance of rain or snow on Tuesday.

b)

TRUE

b)

FALSE

9. It will be a low of -12 degrees on April 13th.

b)

TRUE

b)

FALSE

10. It's going to snow on Saturday.

b)

TRUE

b)

FALSE