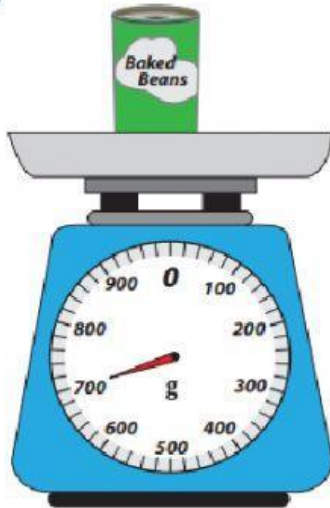


## Unit 13 & 14 Mock Test

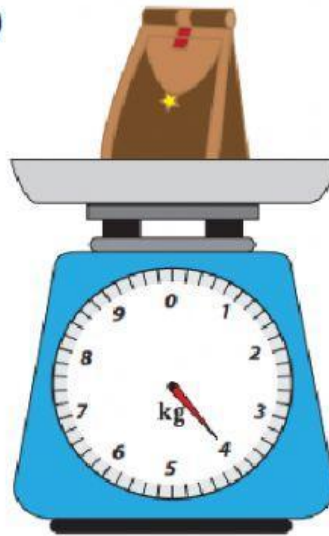
Write the mass in the boxes below. Circle if it is in grams or kilograms

4)




\_\_\_\_\_ g

5)

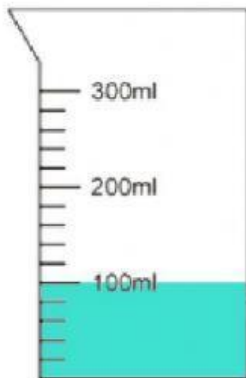


\_\_\_\_\_ kg

6)




\_\_\_\_\_ kg



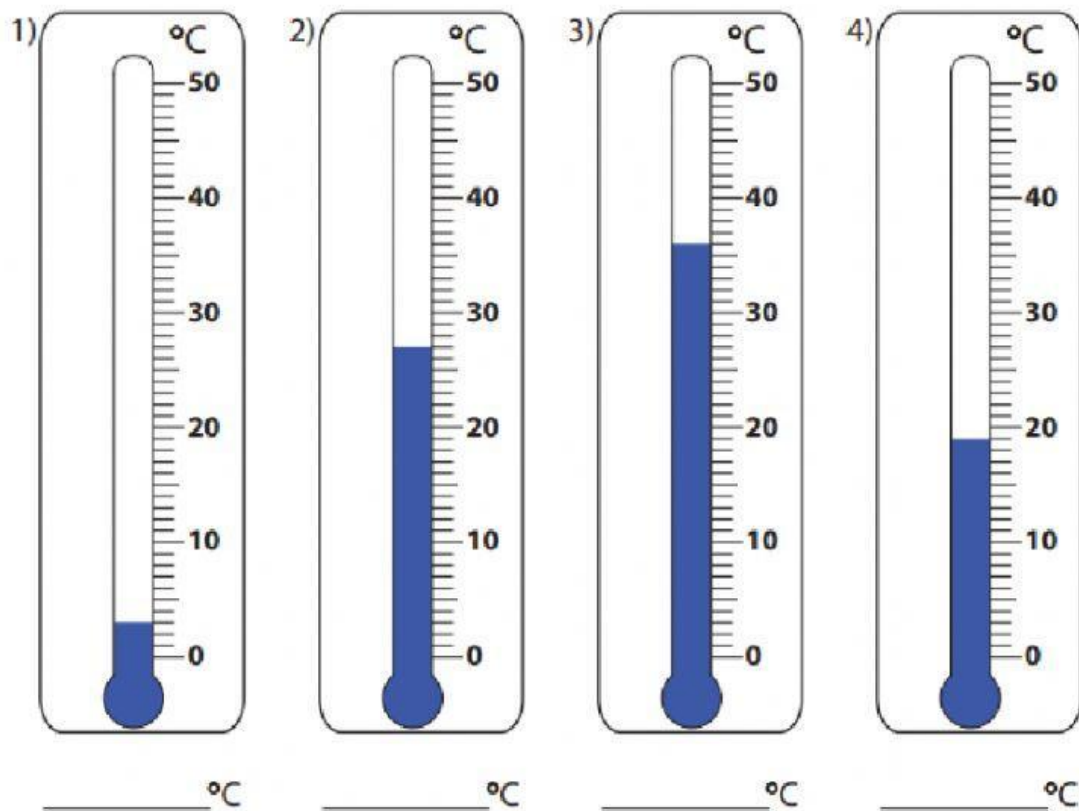
\_\_\_\_\_



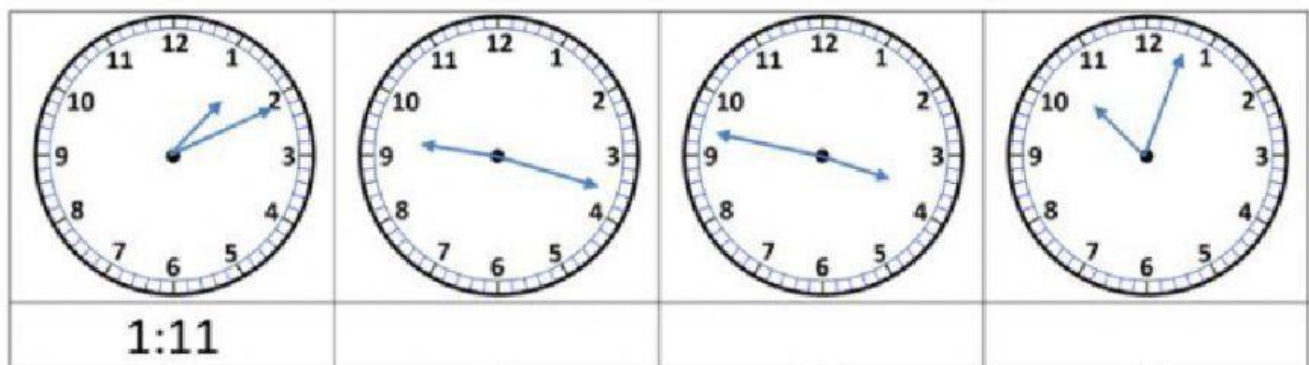
\_\_\_\_\_



\_\_\_\_\_



Write the correct time underneath each clock.



Art	ICT	PE	Maths	Sports	Science
10:00 – 11:00	11:15 – 11:45	11:45 – 12:45	2:00 – 2:45	2:50 – 3:50	4:00 – 5:30

1a) Which lesson is the shortest? \_\_\_\_\_

1b) How long did it last? \_\_\_\_\_

2a) Which lesson is the longest? \_\_\_\_\_

2b) How long did it last? \_\_\_\_\_

JUNE						
MO	TU	WE	TH	FR	SA	SU
		1	2	3	4	5
6	7	8	9	10	11	12
13	14	15	16	17	18	19
20	21	22	23	24	25	26
27	28	29	30			

JULY						
MO	TU	WE	TH	FR	SA	SU
				1	2	3
4	5	6	7	8	9	10
11	12	13	14	15	16	17
18	19	20	21	22	23	24
25	26	27	28	29	30	31

AUGUST						
MO	TU	WE	TH	FR	SA	SU
1	2	3	4	5	6	7
8	9	10	11	12	13	14
15	16	17	18	19	20	21
22	23	24	25	26	27	28
29	30	31				

**A. How many days are between 18th of July and 2nd of August?**

Answer: \_\_\_\_\_

**B. What is the date two weeks after 8th of June?**

Answer: \_\_\_\_\_

**c. My dad's birthday is on the 4th August. What day of the week is this?**

Answer: \_\_\_\_\_

**D. Your mum wants you to book your flight 14 days before you travel. If you're leaving on the 21st of July, which day should you buy the ticket?**

Answer: \_\_\_\_\_

**E. Kate was born on the 16th of June 2003. How old will she be on her birthday in 2022?**

Answer: \_\_\_\_\_

Bus stop	Bus 1	Bus 2	Bus 3
Oxford street	8:14	8:24	8:34
Market street	8:42	8:50	-
School	8:54	9:02	9:12
Top Road	9:06	9:14	9:20

How long does it take bus 2 to get from School to Top Road?

\_\_\_\_\_

How long does it take bus 1 to get from Oxford Street to Market Street? \_\_\_\_\_

How long does it take bus 3 to get from Oxford Street to Top Road? \_\_\_\_\_