

Name: _____

Date: _____


Venn Diagram

1 Here are some numbers.


1	2	3	4	5	6	7	8	9	10
11	12	13	14	15	16	17	18	19	20

Write the numbers in the correct place on each Venn diagram.
You need not use all the numbers.


(a) smaller than 8




greater than 8



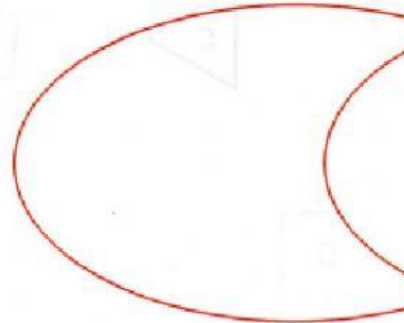
(b) less than 13



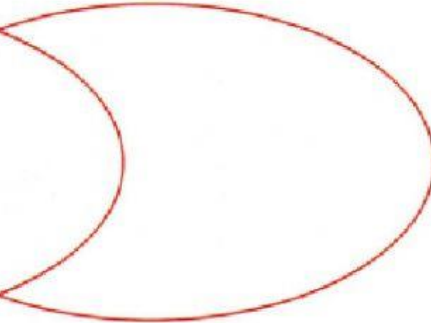
more than 13



(c) less than 11



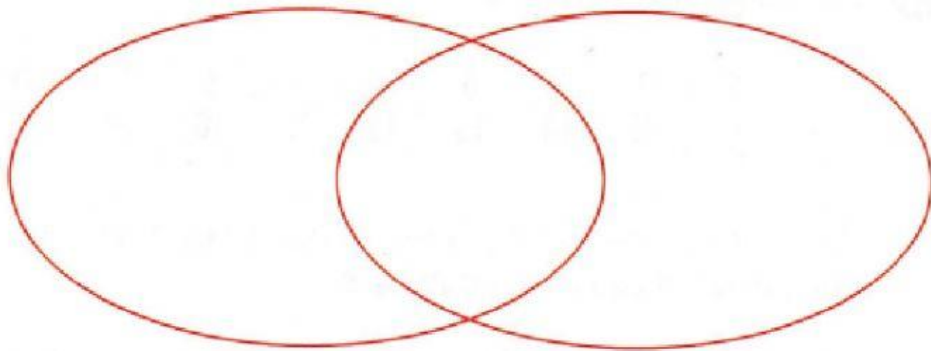
more than 8



(d)

more than 10

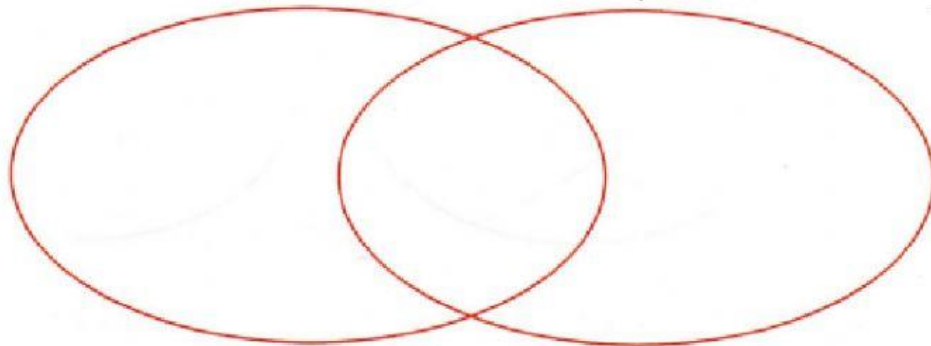
less than 16



★ (e)

multiples of 2

multiples of 3



How do you do your worksheet?

(write A, B, or C)



A. I can do the worksheet
by myself



B. I need a little help



C. I need a lot of help