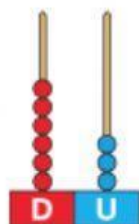



1 Observa y completa.



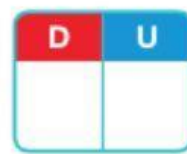


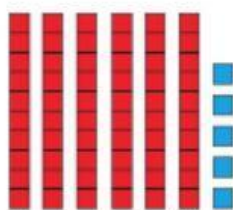
decenas y unidades

$$\square + \square = \square$$



decenas y unidades

$$\square + \square = \square$$



2 Completa. Después escribe cómo se leen los números de las casillas de color.

	59	
--	----	--

69		
----	--	--

		79
--	--	----

61		
----	--	--

		75
--	--	----

	76	
--	----	--

--	--	--

--	--	--

--	--	--

--	--	--