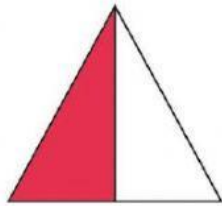


MATH-KINDER\_Q3  
MASTERY TEST

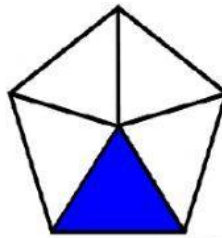
FRACTIONS




What is the fraction of the shaded parts of the whole?  
Click the correct fractions.



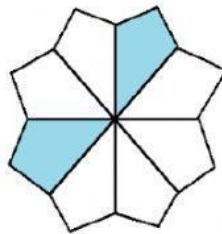
$\frac{1}{4}$     $\frac{1}{2}$



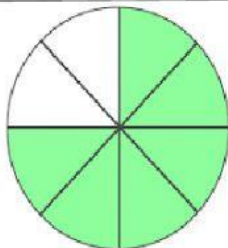
$\frac{1}{5}$     $\frac{1}{6}$




$\frac{2}{5}$     $\frac{3}{5}$



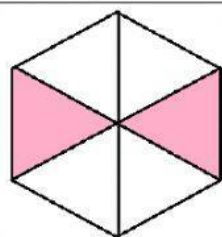
$\frac{2}{7}$     $\frac{2}{8}$



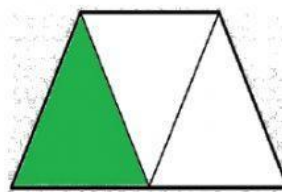
$\frac{2}{8}$     $\frac{6}{8}$



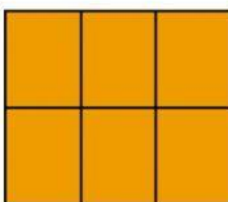
$\frac{5}{5}$     $\frac{5}{6}$



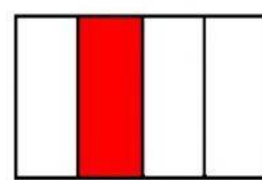
$\frac{2}{6}$     $\frac{4}{6}$



$\frac{3}{3}$     $\frac{1}{3}$



$\frac{1}{6}$     $\frac{6}{6}$



$\frac{1}{4}$     $\frac{3}{4}$


What fraction of the food has been **eaten**? Click the correct answer.



$$\frac{1}{4}$$

$$\frac{1}{2}$$

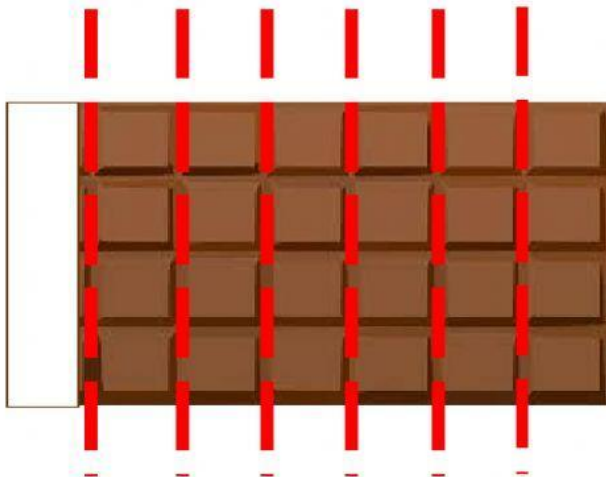
$$\frac{1}{1}$$



$$\frac{4}{4}$$

$$\frac{1}{4}$$


$$\frac{1}{2}$$



$$\frac{1}{5}$$

$$\frac{1}{6}$$

$$\frac{1}{7}$$




$$\frac{3}{4}$$

$$\frac{3}{3}$$

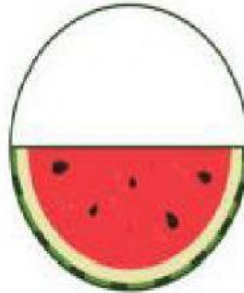
$$\frac{3}{5}$$

What is the fraction of the **uneaten** watermelon? Click the correct fractions.



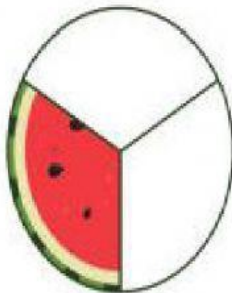
$\frac{1}{1}$

$\frac{0}{1}$



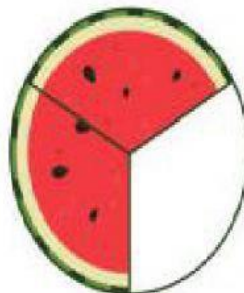
$\frac{1}{4}$

$\frac{1}{2}$



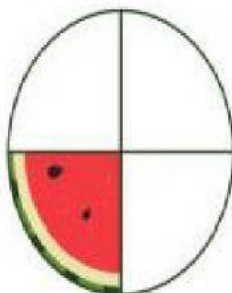
$\frac{1}{3}$

$\frac{1}{1}$




$\frac{1}{3}$

$\frac{2}{3}$



$\frac{1}{3}$

$\frac{1}{4}$



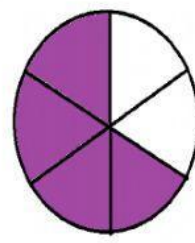
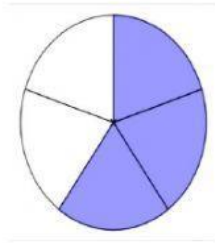
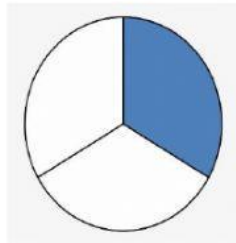
$\frac{2}{3}$

$\frac{3}{4}$


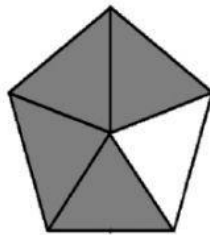


What do you think is the shape that shows correct shaded part of a whole? Click your answer.

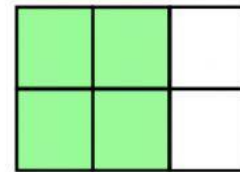


$$\frac{3}{5}$$



$$\frac{1}{7}$$





$$\frac{4}{6}$$



$$\frac{1}{1}$$



$$\frac{5}{8}$$



-END OF TEST-