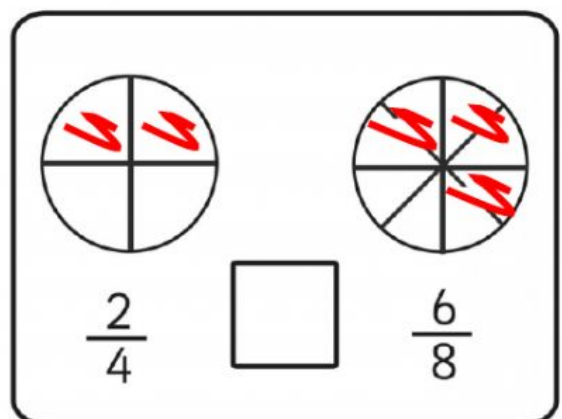
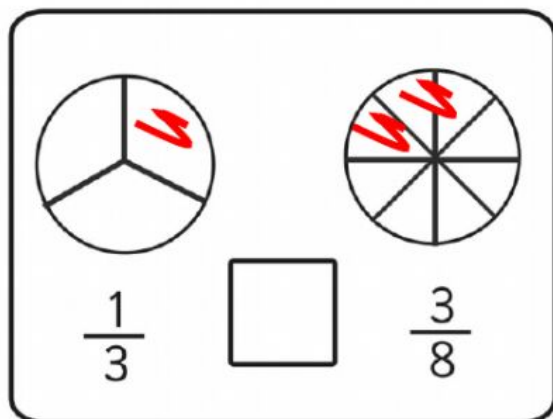
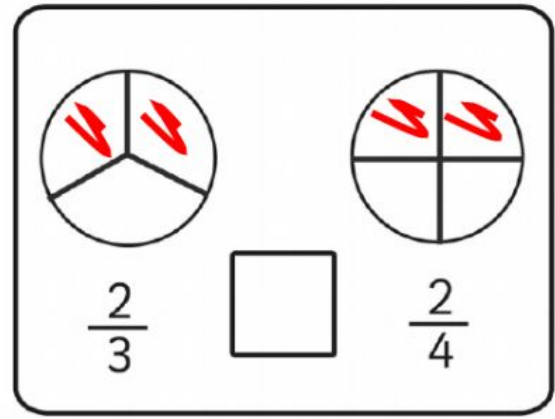
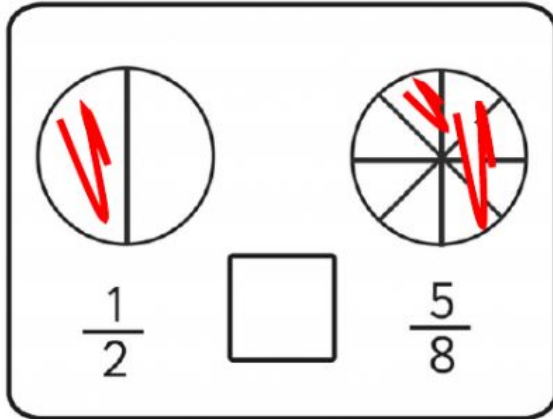


Name: \_\_\_\_\_

## Fractions

Class: \_\_\_\_\_

A) Compare the fractions with  $<$   $>$   $=$ .



B) Solve the fraction word problems and explain.

A boy reads  $\frac{2}{3}$  of a book and a girl reads  $\frac{1}{3}$  of a book.

Who reads more?

Word Answer and explanation:

---

---

Sam walks  $\frac{4}{6}$  of a road. Tom walks  $\frac{5}{6}$  of a road.

Who walks more of the road?

*Word Answer and explanation:*

---

---

Lee eats  $\frac{3}{4}$  of a cake. Mai eats  $\frac{7}{8}$  of a cake.

Who eats more cake?

*Word Answer and explanation:*

---

---

Tim eats  $\frac{1}{3}$  of a burger. Kim eats  $\frac{2}{4}$  of a burger.

Who eats more burger?

*Word Answer and explanation:*

---

---