


































Pizza pictograph

Data and Graphing Worksheet

Jake recorded the number of pizzas sold over five days.

Read the chart and answer the questions.

Day	Number of pizzas sold
Monday	    
Tuesday	        
Wednesday	   
Thursday	       
Friday	     

 = 5 pizzas

1. How many pizzas did he sell on Thursday? _____
2. Which day did he sell the least pizzas? _____
3. Which day did he sell the most pizzas? _____
4. Which day did he sell 25 pizzas? _____
5. How many pizzas did he sell on Monday and Wednesday? _____
6. Were more pizzas sold on Monday or Friday? _____
7. How many less pizzas were sold on Friday than Thursday? _____
8. How many pizzas did he sell in five days? _____