





# NAME THAT POLYGON!

*Directions: Identify the name of the polygons . Input the answer in the box.*



Name: \_\_\_\_\_

Date: \_\_\_\_\_

Section: \_\_\_\_\_

Score: \_\_\_\_\_