



Cambridge Primary Programme

CAMBRIDGE PRIMARY MATHEMATICS 1 PAIRS – ODD NUMBERS – EVEN NUMBERS

Name: _____

Date: _____

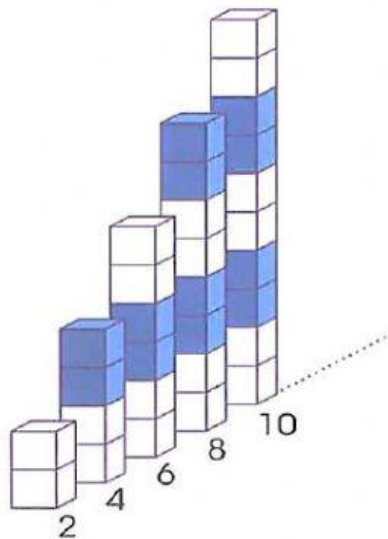
Class: _____



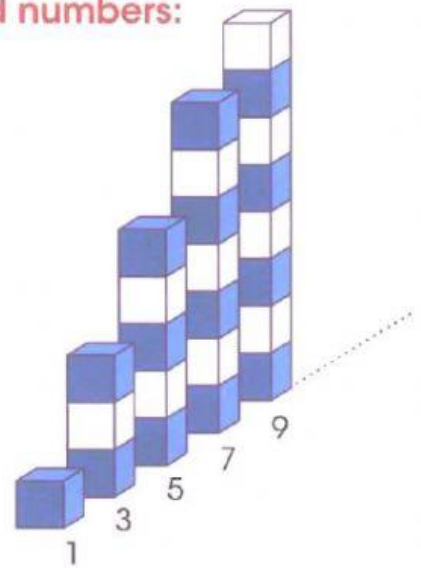
pair:



even numbers:






odd numbers:







1. Find a pair in each line.



B

B

D




2. Choose even or odd for each number.

7 Even Odd	1 Even Odd
2 Even Odd	4 Even Odd
8 Even Odd	5 Even Odd


3. Choose the correct number.

45	12	20
----	----	----



Even numbers

55	87	34
----	----	----



Odd numbers

4. Write the numbers of items and choose odd or even.




What's for Dinner?


	7	<input checked="" type="radio"/> odd <input type="radio"/> even
		<input type="radio"/> odd <input type="radio"/> even
		<input type="radio"/> odd <input type="radio"/> even
		<input type="radio"/> odd <input type="radio"/> even
		<input type="radio"/> odd <input type="radio"/> even
		<input type="radio"/> odd <input type="radio"/> even
		<input type="radio"/> odd <input type="radio"/> even
		<input type="radio"/> odd <input type="radio"/> even
		<input type="radio"/> odd <input type="radio"/> even
		<input type="radio"/> odd <input type="radio"/> even

5.

(a) Look at the gloves.

	<p>How many gloves?</p> <input data-bbox="933 448 1010 526" type="text"/> <hr/> <p>Is that an odd or even number?</p> <p>odd / even</p>
---	---

(b) Look at the socks

	<p>How many socks?</p> <input data-bbox="933 1209 1010 1288" type="text"/> <hr/> <p>Is that an odd or even number?</p> <p>odd / even</p>
---	--