



2nd GRADE

MUNDO INFANTIL SCHOOL
SCIENCE TEST

I PARTIAL 25%

NAME _____

DATE: _____

Match.



ANIMALS GROW



ANIMALS DIE



ANIMALS ARE BORN



ANIMALS REPRODUCE

Tick (/) for the correct animal's reproduction way.



Lay eggs ☐
Give birth ☐



Lay eggs ☐
Give birth ☐



Lay eggs ☐
Give birth ☐








Lay eggs ☐
Give birth ☐

Butterfly Life Cycle

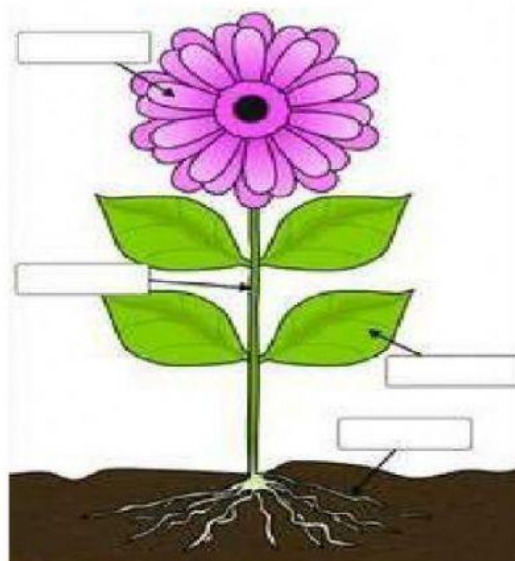
1	2	3	4

Place each picture on the correct number from 1 to 5 to complete the sequence of the Frog life cycle

1	2	3	4	5
---	---	---	---	---

				
---	---	---	--	---

Parts of the plant



Leaves

Flower

Roots

Stem

Needs of a Plant

Select all the things a plant needs to survive and grow.

