



MATH TEST

2nd Grade – III Partial



Student's Name: _____

Teacher's Name: Mrs. Ayala Points: 25% Score ____%

School Year: 2021-2022

Topics: Add and Subtract, Numbers between, Bar graph,
Add money, Halves, Count by tens and two.

Date: _____

Teacher Comment:

PART I. TRUE OR FALSE.

5 pts (1 pt. each)

Instructions: Read the following statement and write a "T" if it's true, and "F" if it's false.

1. $38+18= 55$?
2. In the number 1,234 the number 3 is in the place of the hundreds?
3. $59-16 = 40$?
4. 5 Dimes is = 60 cents ?
5. 1 penny + 2 quarters is = 51 cents?

PART II. MULTIPLE CHOICE.

5 pts (0.83 pt. each)

Instructions: Read carefully each number and write the sums. Remember to carry.

☐

| | |
|-------|---|
| 5 | 4 |
| +1 | 6 |
| <hr/> | |

☐

| | |
|-------|---|
| 2 | 5 |
| +2 | 5 |
| <hr/> | |

☐

| | |
|-------|---|
| 1 | 4 |
| +1 | 8 |
| <hr/> | |

☐

| | |
|-------|---|
| 5 | 2 |
| +2 | 9 |
| <hr/> | |

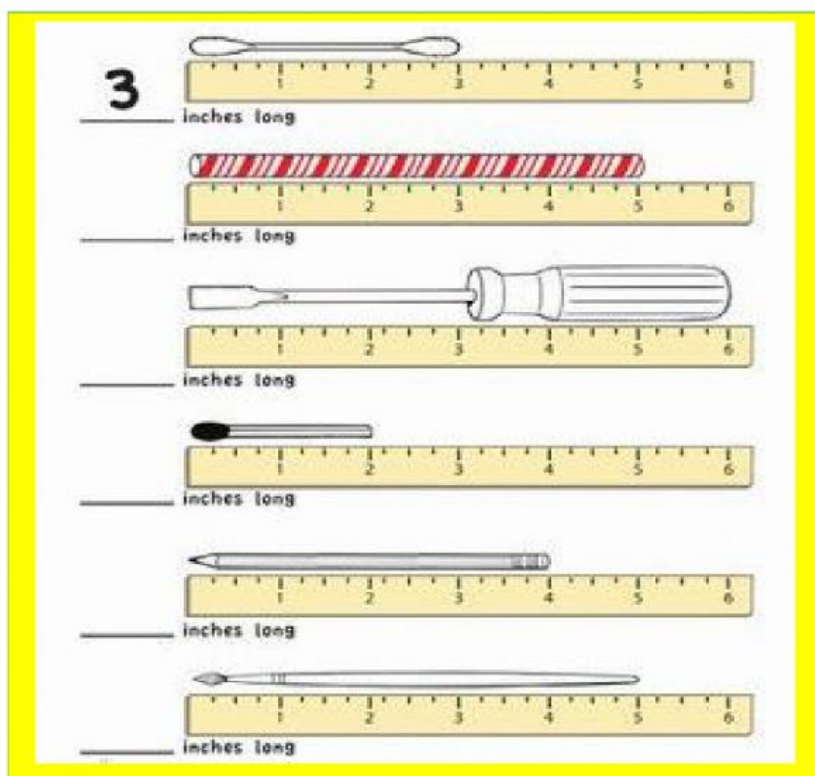
☐

| | |
|-------|---|
| 7 | 4 |
| +1 | 7 |
| <hr/> | |

PART III. PRACTICE

5 pts (1 pt. each)

Instructions: Look carefully the pictures and write the correct measure for each one, the first was done for you.



PART IV. MATCHING

6 pts (1 pt. each)


Instructions: Look at the picture, and select the correct number using the place value.

| | | | |
|------------|-----|------------|-----|
| 2 hundreds | 295 | 0 hundreds | 960 |
| 5 tens | 259 | 9 tens | 96 |
| 9 ones | 290 | 6 ones | 69 |
| 4 hundreds | 440 | 1 hundred | 135 |
| 0 tens | 444 | 5 tens | 153 |
| 4 ones | 404 | 3 ones | 53 |
| 9 hundreds | 938 | 8 hundreds | 800 |
| 8 tens | 893 | 8 tens | 808 |
| 3 ones | 983 | 0 ones | 880 |



PART V. FILL-IN-THE-BLANK

4 pts (1 pt. each)





Instruction: Look carefully the amount of dollars and cents, sum and write the correct answer.




+





+






=




+






+





=






+



+






=



+


+

+



=

Mrs.Ayala

 **LIVEWORKSHEETS**