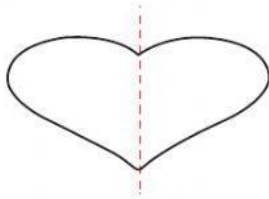


Watch the lesson then
Complete the worksheet

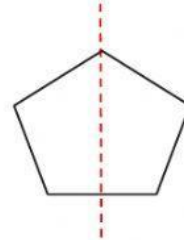
Identifying Line of symmetry

Select **yes** or **no** if the dotted on each shape shows a **line of symmetry**.

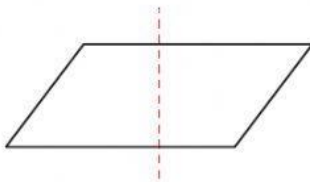
1)



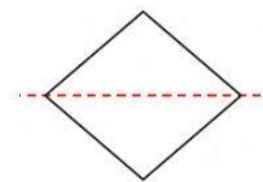
2)



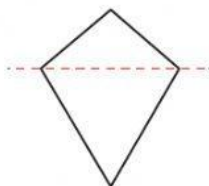
3)



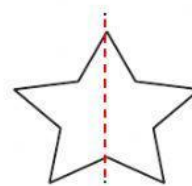
4)



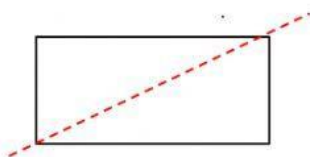
5)



6)



7)



8)

