

## MATHS 2 ( P34-35)



FIND THE MISSING NUMBERS:



- A. Three, thirteen, seventeen, nineteen, twenty
- B. Three, eight, seventeen, twenty, thirteen
- C. Three, thirteen, seventeen, twenty, nine


**DOUBLE LINES:**


Look at the picture:

Is this  the double lines of 

Yes

No

This  is the double lines of:



**WRITE PAIRS TO 20:**

