

Name: \_\_\_\_\_

Year 2 Bijak

Monday


28<sup>th</sup> March 2022

Chapter 4 - Multiplication and Division

**Topic: How to divide**

1.) Fill in the blanks.

(a) There are 10 pupils.



$$10 \div 5 = \underline{\quad}$$

There are \_\_\_\_\_ groups of 5.

(b) There are 16 fish.




$$16 \div 4 = \underline{\quad}$$

There are \_\_\_\_\_ groups of 4.

2. Find the number of items in each group.

Divide 15 eggs equally into 5 nests.

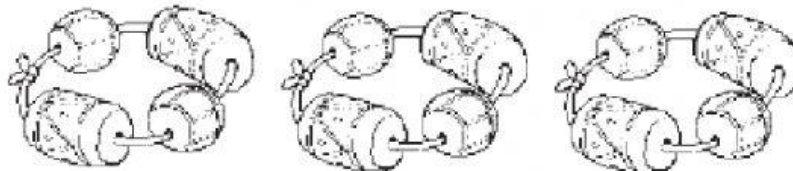


$$15 \div \underline{\quad} = \underline{\quad}$$

There are            eggs in each nest.

3. Find the number of groups.

(a) Divide 12 beads into groups of 4.



$$12 \div \underline{\quad} = \underline{\quad}$$

There are            groups of 4 beads.

4. Read the story.  
Then, fill in the blanks.

- (a) There are 10 gloves.  
Papa Bear gives 2 gloves to  
each cub.  
How many cubs are there?


$$\square \div \square = \square$$

There are \_\_\_\_\_ cubs.



5. Read the story.  
Then, fill in the blanks.

- (a) Ali collects stamps.  
He has 20 stamps.  
He puts 4 stamps on 1 page of  
his album.  
How many pages does he need?



$$\square \div \square = \square$$

He needs \_\_\_\_\_ pages.