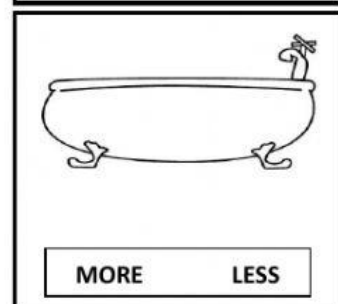
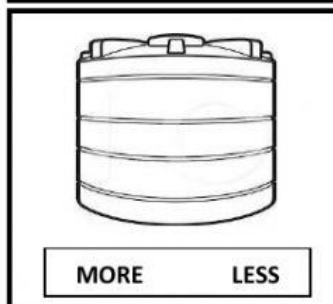
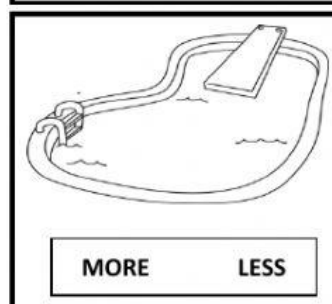


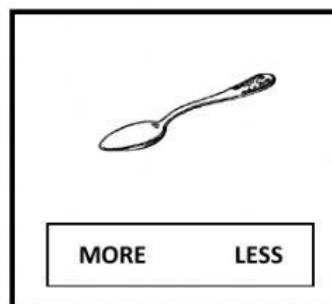



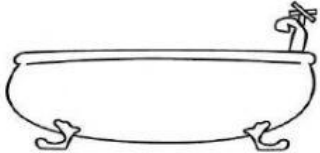


Name -			
Phase 1- Foundation Numeracy Class Worksheet -18			
Stage-	Proficient	Grade-	3
Conceptual Area -	Measurement	Topic-	Comparing and measuring Volume/Capacity in units

A. Circle MORE or LESS depending upon if it's more or less than 1 litre.



B. Which unit of capacity (litres or millilitres) would you use to measure the liquid in these containers?




Litres
Millilitres

A bath tub




Litres
Millilitres

A tea cup



Litres
Millilitres

A Jug




Litres
Millilitres

A watering can



Litres
Millilitres

Perfume bottle



Litres
Millilitres

A can of coke

C. Draw a circle around the object which holds more than 1 Litre.

