



Name -			
Phase 1- Foundation Numeracy Class Worksheet -17			
Stage-	Proficient	Grade-	3
Conceptual Area -	Measurement	Topic-	Comparing and measuring Volume/Capacity in units

A. Tick the correct option

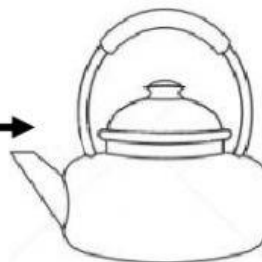
Colour the object you would use to fill a bucket.



Colour the object you would use to fill a cup.




Colour the object you would use to fill a kettle.



Colour the object you would use to fill a glass.




B. Tick (✓) the correct option according to your estimate.




**5 cups**

or




**1 cup**

or



**15 cups**

—





**5 mugs**

or



**1 mug**


or



**15 mugs**


—






**10 cups**

or




**6 cups**


or



**1 cup**


—






**20 glasses**

or



**1 glass**

or



**4 glasses**

—

