



MIRA EL VIDEO




AYUDEMOS A SAURI A HACER ESTAS RESTAS:



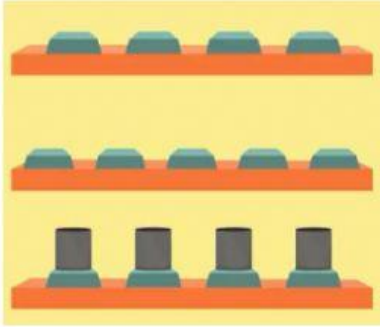
$$\begin{array}{r} \square \\ - \square \\ \hline \square \end{array}$$




$$\begin{array}{r} \square \\ - \square \\ \hline \square \end{array}$$



$$\begin{array}{r} \square \\ - \square \\ \hline \square \end{array}$$



$$\begin{array}{r} \square \\ - \square \\ \hline \square \end{array}$$



$$\begin{array}{r} \square \\ - \square \\ \hline \square \end{array}$$