

Task Sheet 2021-2022
TERM 2

Subject	Mathematics	Date		Roll No.	
Name				Grade/Section	1 AB

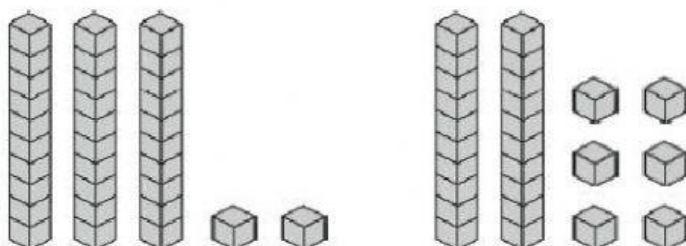
Task 1: Count in steps of 2, 3 and 5 from 0 and continue the sequence.

12	14	16				
55	50	45				
23	33	43				
6	9	12				


Task 2: Match the following numbers in words to the numbers in digits.

sixteen	74
seventy four	16
sixty	47
forty seven	60

Task 3: What calculation is represented here?



Task 4: Here are 3 digit cards.



a. Make a 2 digit odd number

b. Make a 3 digit number greater than 125

c. Make a 3 digit even number

Task 5: Circle the even number.

19

4


27

38

12

41

Task 6: Write a multiplication sentence around the following picture.



Each box contains 5 pens. How many pens are there altogether?