




Name -			
Phase 1– Foundation Numeracy Class Worksheet -33			
Stage-	Beginner	Grade-	1
Conceptual Area -	Geometry	Topic-	Identifying space- top, bottom, under, inside, outside etc.

A. Look at this person and count the shapes

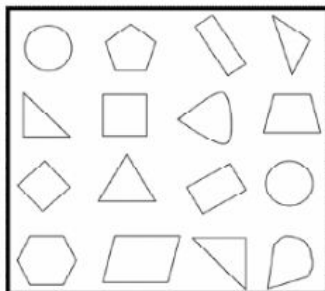
a) My hat has	
_____	Circles
_____	Triangles
_____	Squares
_____	Rectangles
b) My face has	
_____	Circles
_____	Triangles
_____	Squares
c) My body is in _____ shape	
d) My arms are in _____ shape	
e) My legs are in _____ shape	
f) My feet are in _____ shape	



B. Colour the shapes as follows:

Squares–blue Triangles- green

Circles- red Rectangles- Yellow




How many shapes were not coloured?

C. Who am I? Draw and write the name.

- I have three sides.
- My two sides are equal.
- I have no straight sides only curved side.

D. Match the picture to its shadow.



E. Circle all the objects that roll easily

