




Name -			
Phase 1– Foundation Numeracy Class Worksheet -32			
Stage-	Beginner	Grade-	1
Conceptual Area -	Geometry	Topic-	Identifying space- top, bottom, under, inside, outside etc.


A. Circle the correct picture.

a) The animal above 



c) The animal above 



b) The thing below 



d) The thing below 



e. Draw a  below 



B. Colour only the trees that are far from the house.

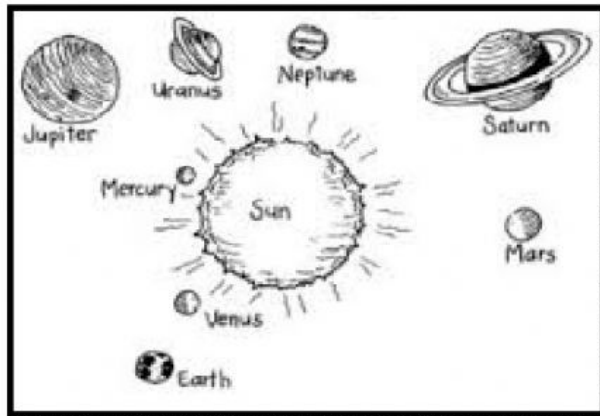


C. Circle the waiter near to the customer.





D. Colour the nearest planet to the Earth RED and the farthest planet BLUE. Write the name too.



Nearest Planet:

—

Farthest Planet:

E.